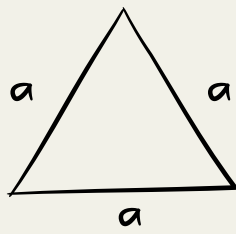
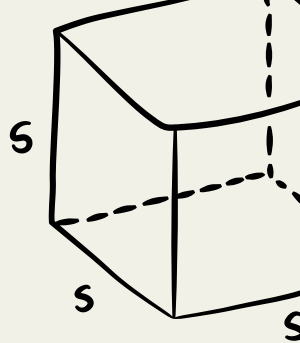



$$\frac{-b \pm \sqrt{b^2 - 4ac}}{2a}$$

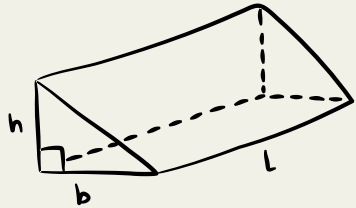


$$A = \frac{\sqrt{3}}{4} a^2$$

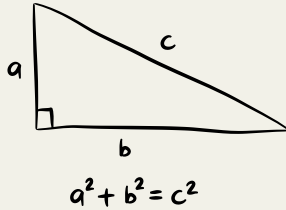


$$V = s^3$$

$$\frac{x}{a} + \frac{y}{b} = 1$$

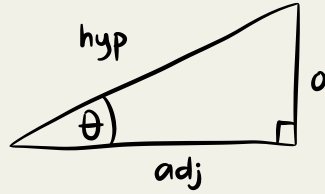


$$V = \frac{1}{2} bhl$$



$$a^2 + b^2 = c^2$$

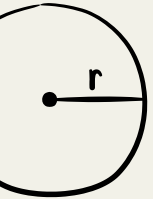

$$S = \frac{d}{t}$$



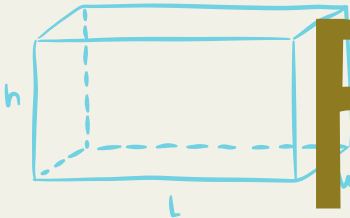
$$\sin(\theta) = \frac{\text{opp}}{\text{hyp}}$$

$$M = \left(\frac{x_1 + x_2}{2}, \frac{y_1 + y_2}{2} \right)$$

BASIC MATHS



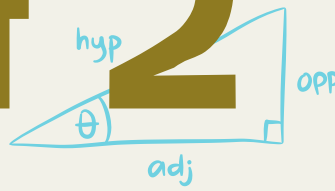
$$A = \pi r^2$$



$$V = Lwh$$

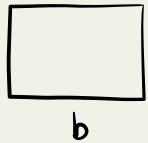
$$a = \frac{V_f - V_i}{t}$$

$$ax^2 + bx + c = 0$$



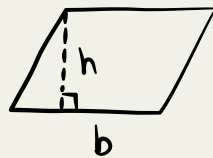
$$\cos(\theta) = \frac{\text{adj}}{\text{hyp}}$$

$$S = \frac{d}{t}$$



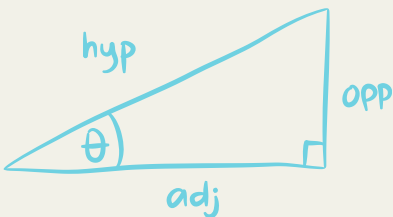
$$A = bh$$

$$y = mx + b$$

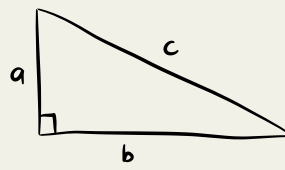


$$A = bh$$

$$a + (b + c) = (a + b) + c$$

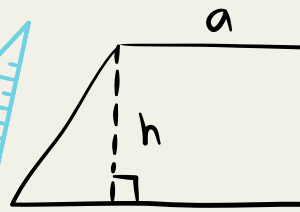
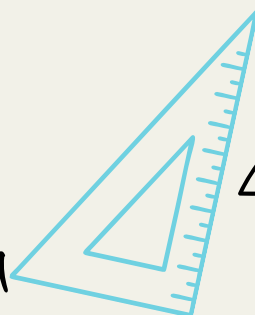


$$\tan(\theta) = \frac{\text{opp}}{\text{adj}}$$

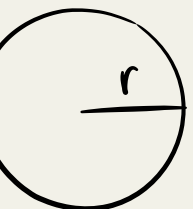


$$a^2 + b^2 = c^2$$

$$a + 0 = a$$



$$A = \frac{a+b}{2} h$$



INDEX

	LESSONS	PAGE
BASIC MATHS - PART 2	<i>Numbers 1-300</i>	1
	Number chart puzzle	4
	Addition – horizontal	10
	Addition – vertical	15
	Subtraction – horizontal	20
	Subtraction – vertical	25
	Sides of a circle	30
	Addition equations	32
	Sides of a square	37
	Subtraction equations	39
	Sides of a rectangle	44
	Addition and subtraction equations	46
	Sides of a triangle	51
	Addition – fill in the boxes	53
	Sides of an oval	58
	Subtraction – fill in the boxes	60
	Sides of a kite	65
	Part, part whole – circle	67
	Sides of a pentagon	72
	Part, part whole – rectangle	74
	Sides of an hexagon	79
	Addition triads	81
	Sides of an heptagon	86
	Tower addition	88
	Sides of an octagon	94
	Addition and subtraction problems	96
	Roman numerals	101
	Alphabetical order	107
	Way through the maze	113
	Expanded forms and number words	118

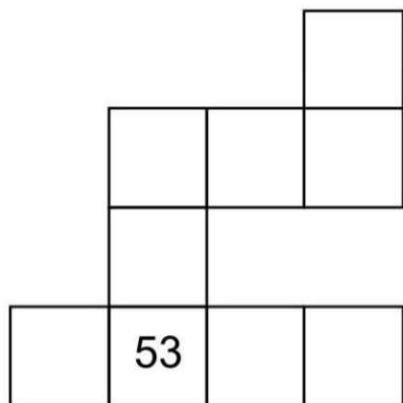
11									
					26			29	
					36				
							58		
							68		
	72			75					
			84						
								99	

			104						
				125					
	132			135				139	
					156				160
					186				
					196				200

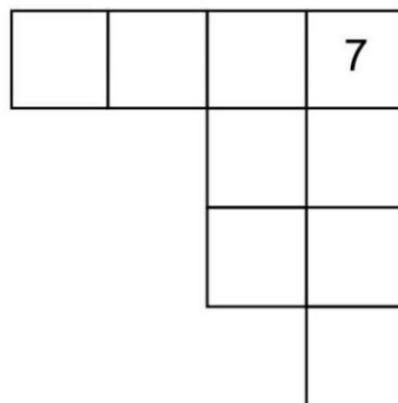
	202			205					
									230
	232								
241				245					
								259	
				275					
					286				
								299	

Using your 100 chart, fill in the empty boxes on each puzzle.

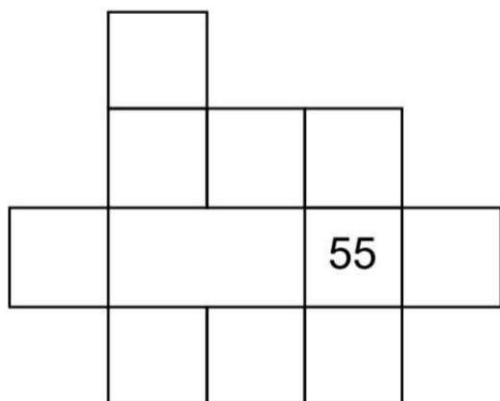
a



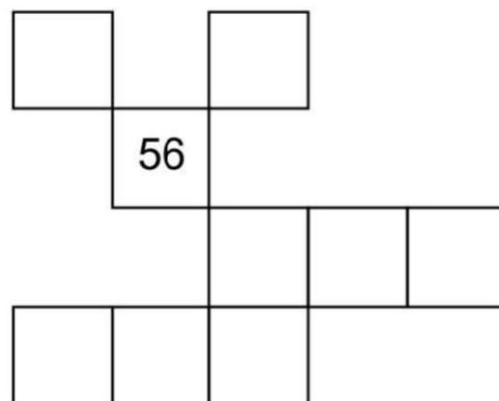
b



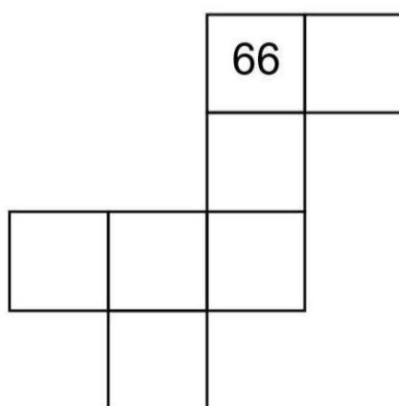
c



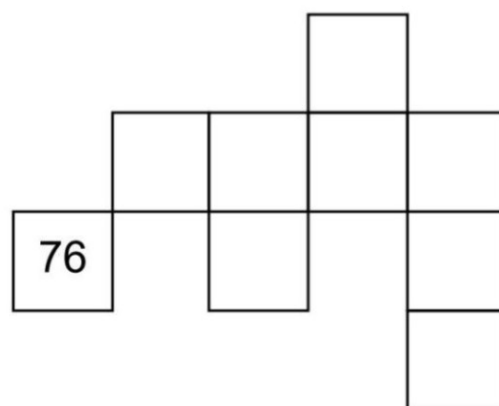
d



e



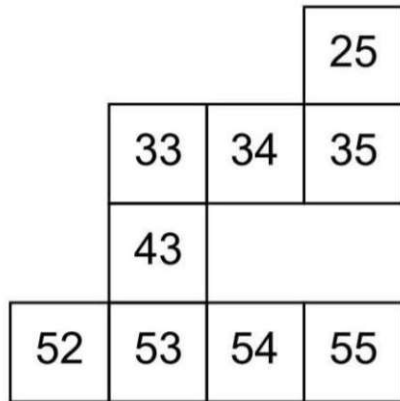
f



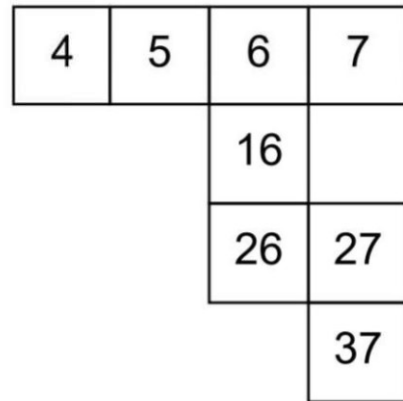
Answer Key

Using your 100 chart, fill in the empty boxes on each puzzle.

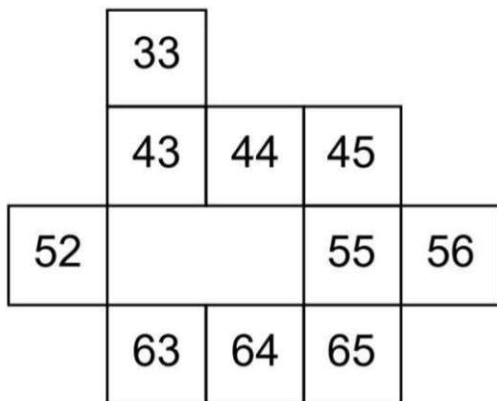
a



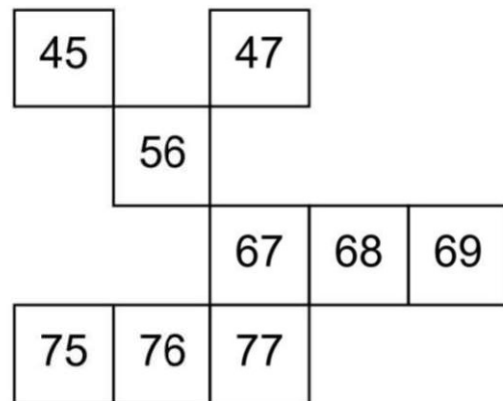
b



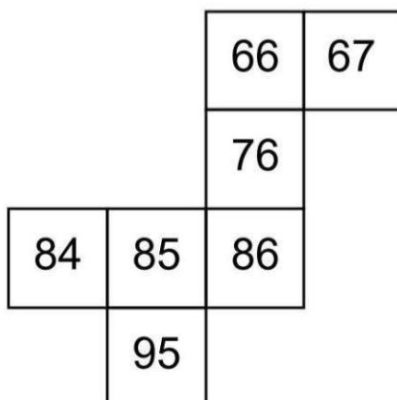
c



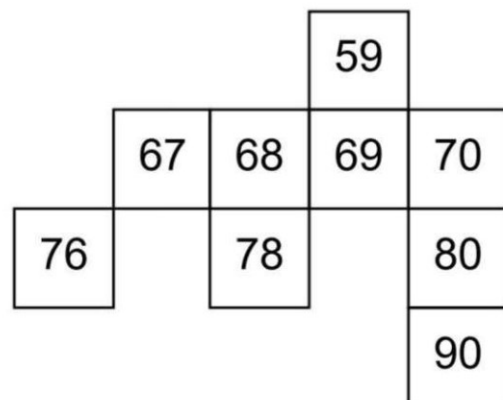
d



e

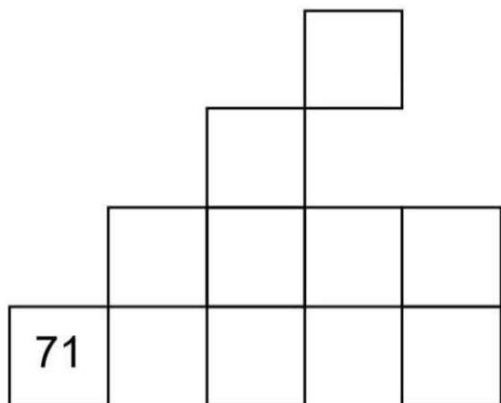


f

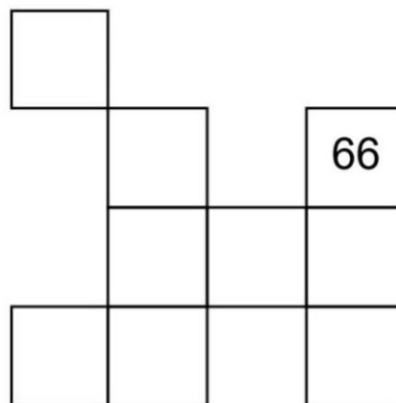


Using your 100 chart, fill in the empty boxes on each puzzle.

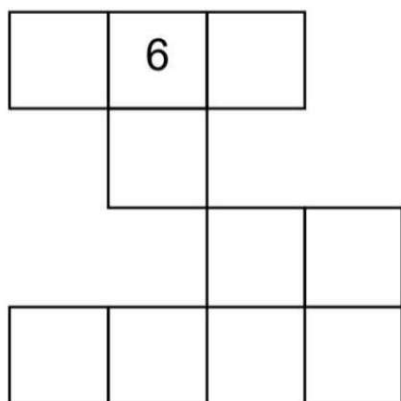
a



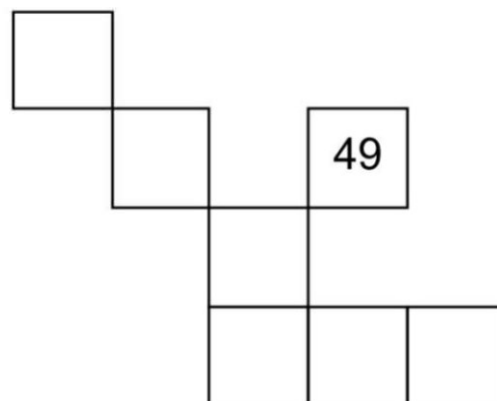
b



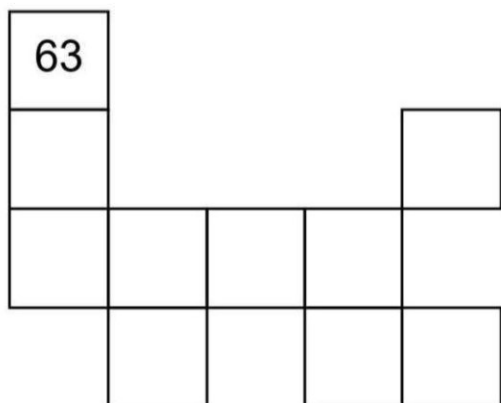
c



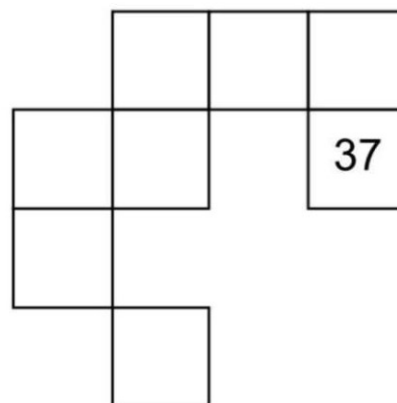
d



e

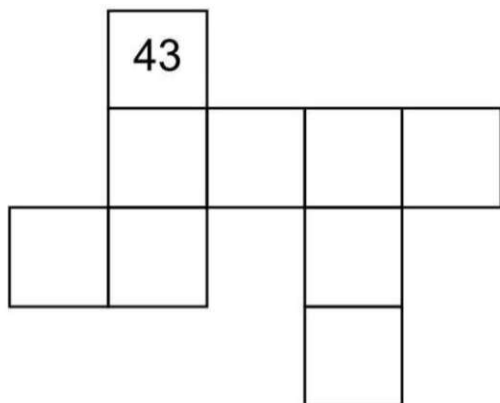


f

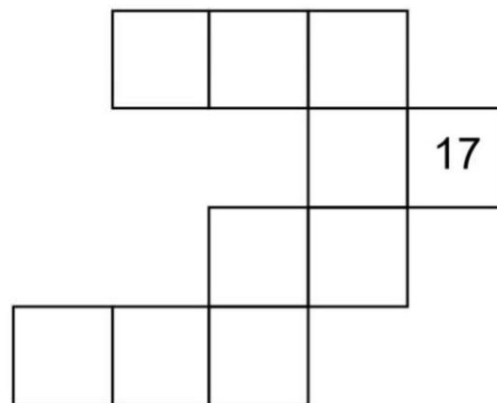


Using your 100 chart, fill in the empty boxes on each puzzle.

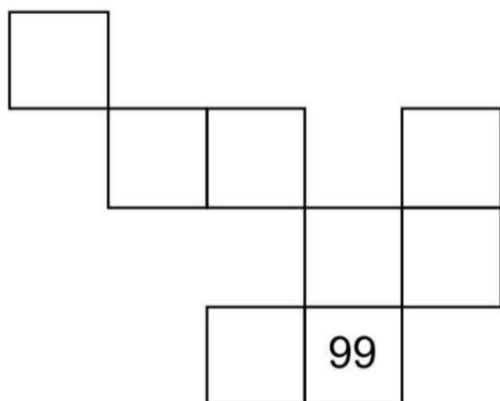
a



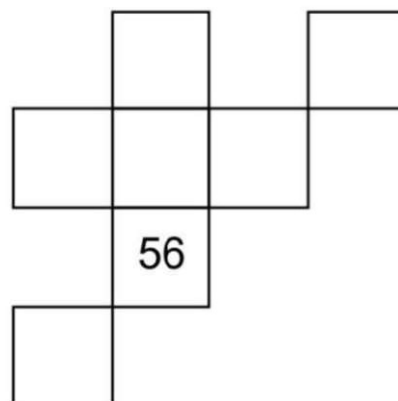
b



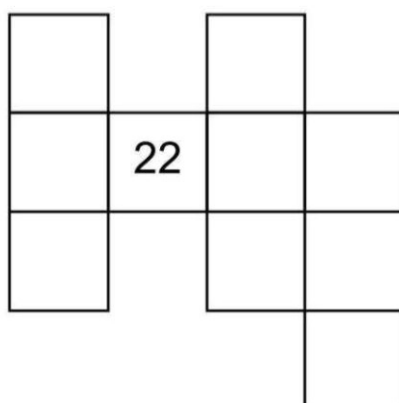
c



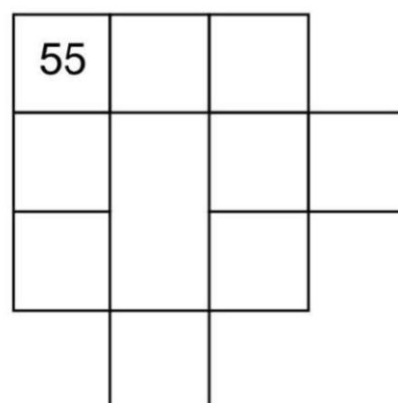
d



e

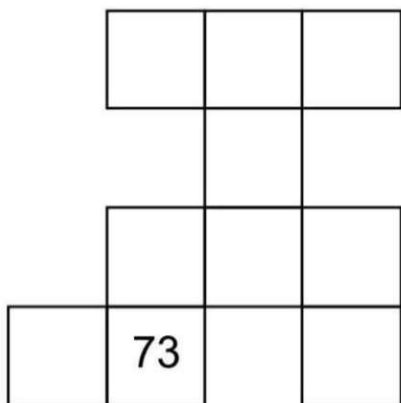


f

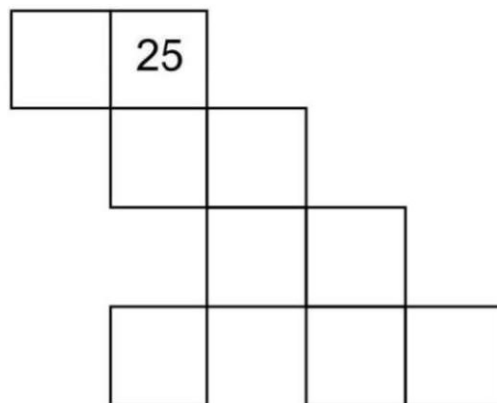


Using your 100 chart, fill in the empty boxes on each puzzle.

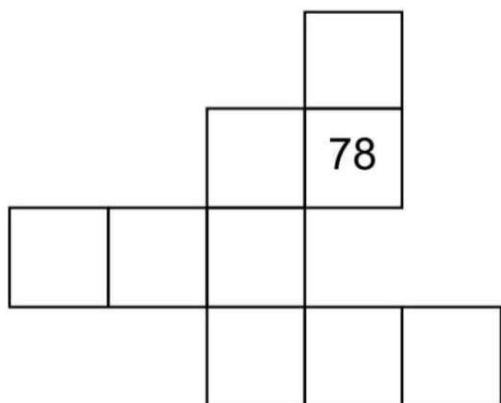
a



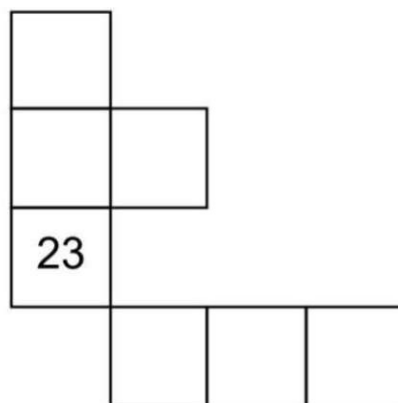
b



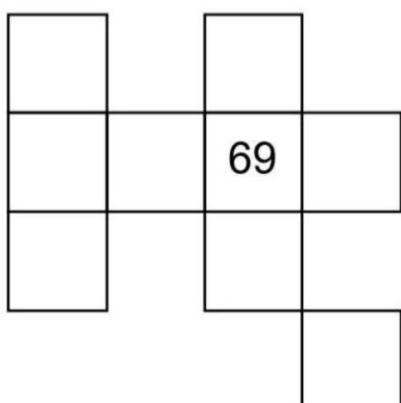
c



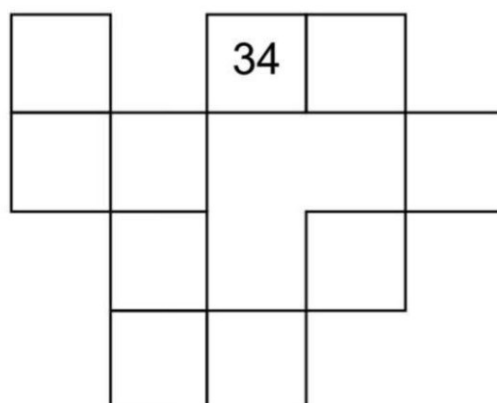
d



e

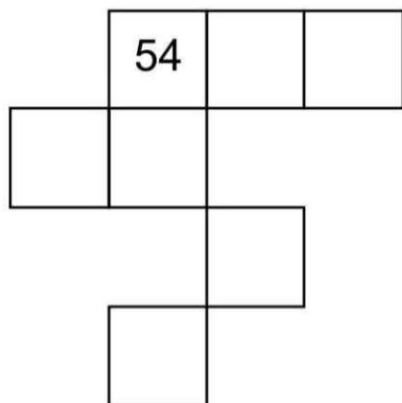


f

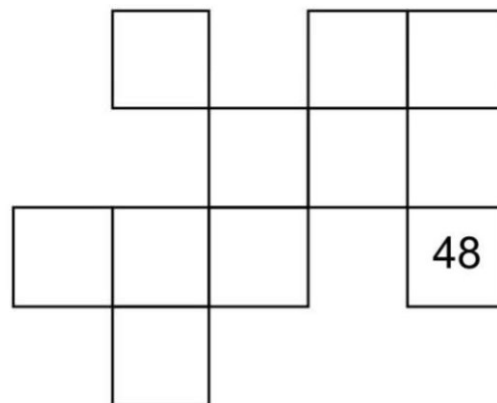


Using your 100 chart, fill in the empty boxes on each puzzle.

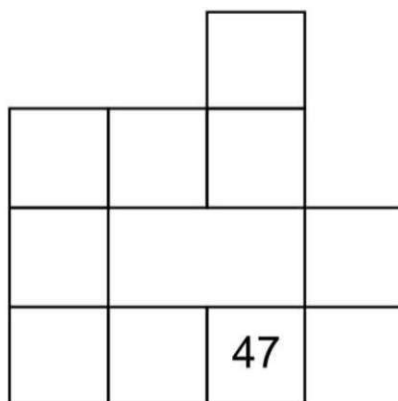
a



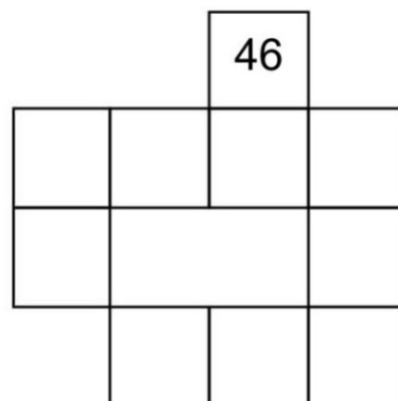
b



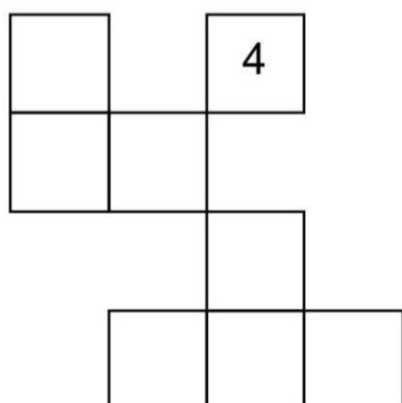
c



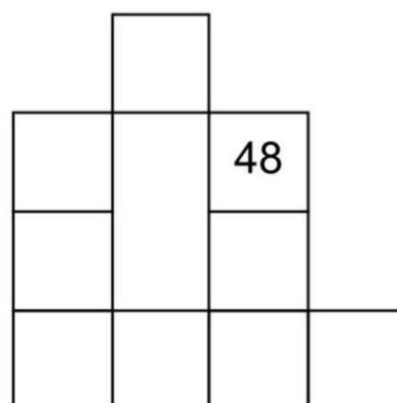
d



e



f



◆◆◆◆◆◆◇◇◇
6 + 3 = _____

▼▼▽▽▽▽▽
2 + 5 = _____

■ ■ ■ ■ □ □
4 + 2 = _____

●●●●●●●○○○
7 + 3 = _____

▲▲▲△
3 + 1 = _____



$$3 + 4 = \underline{\quad}$$



$$3 + 3 = \underline{\quad}$$



$$5 + 5 = \underline{\quad}$$



$$1 + 5 = \underline{\quad}$$



$$6 + 2 = \underline{\quad}$$



$$3 + 4 = \underline{\quad}$$



$$6 + 2 = \underline{\quad}$$




$$7 + 2 = \underline{\quad}$$




$$1 + 9 = \underline{\quad}$$




$$6 + 3 = \underline{\quad}$$



 $8 + 1 = \underline{\quad}$




 $1 + 5 = \underline{\quad}$




 $3 + 2 = \underline{\quad}$




 $1 + 9 = \underline{\quad}$



 $2 + 3 = \underline{\quad}$




 6 + 3 = _____




 5 + 3 = _____



 3 + 3 = _____



 1 + 2 = _____



 4 + 6 = _____

$$\begin{array}{r} 1 \circ \\ + 9 \text{ (9 dots)} \\ \hline \text{ (10 dots)} \end{array}$$

$$\begin{array}{r} 7 \text{ (7 dots)} \\ + 9 \text{ (9 dots)} \\ \hline \text{ (16 dots)} \end{array}$$

$$\begin{array}{r} 3 \text{ (3 dots)} \\ + 4 \text{ (4 dots)} \\ \hline \text{ (7 dots)} \end{array}$$

$$\begin{array}{r} 2 \text{ (2 dots)} \\ + 8 \text{ (8 dots)} \\ \hline \text{ (10 dots)} \end{array}$$

$$\begin{array}{r} 6 \text{ (6 dots)} \\ + 5 \text{ (5 dots)} \\ \hline \text{ (11 dots)} \end{array}$$

$$\begin{array}{r} 2 \text{ (2 dots)} \\ + 7 \text{ (7 dots)} \\ \hline \text{ (9 dots)} \end{array}$$

$$\begin{array}{r} 9 \text{ (9 dots)} \\ + 5 \text{ (5 dots)} \\ \hline \text{ (14 dots)} \end{array}$$

$$\begin{array}{r} 9 \text{ (9 dots)} \\ + 8 \text{ (8 dots)} \\ \hline \text{ (17 dots)} \end{array}$$

$$\begin{array}{r} 7 \text{ (7 dots)} \\ + 4 \text{ (4 dots)} \\ \hline \text{ (11 dots)} \end{array}$$

$$\begin{array}{r} 8 \text{ (8 dots)} \\ + 9 \text{ (9 dots)} \\ \hline \text{ (17 dots)} \end{array}$$

$$\begin{array}{r} 1 \circ \\ + 5 \text{ (5 dots)} \\ \hline \text{ (6 dots)} \end{array}$$

$$\begin{array}{r} 1 \circ \\ + 6 \text{ (6 dots)} \\ \hline \text{ (7 dots)} \end{array}$$

$$\begin{array}{r} 4 \text{ } \circ\circ \\ + 6 \text{ } \bullet\bullet \\ \hline \text{ } \circ\circ\bullet\bullet \\ \text{ } \circ\circ\bullet\bullet \end{array}$$

$$\begin{array}{r} 3 \text{ } \circ\circ \\ + 2 \text{ } \bullet \\ \hline \text{ } \circ\bullet \\ \text{ } \circ\bullet \end{array}$$

$$\begin{array}{r} 6 \text{ } \circ\circ \\ + 2 \text{ } \bullet \\ \hline \text{ } \circ\circ\bullet \\ \text{ } \circ\circ\bullet \end{array}$$

$$\begin{array}{r} 8 \text{ } \circ\circ\circ \\ + 4 \text{ } \bullet\bullet \\ \hline \text{ } \circ\circ\bullet\bullet \\ \text{ } \circ\circ\bullet\bullet \end{array}$$

$$\begin{array}{r} 9 \text{ } \circ\circ\circ \\ + 6 \text{ } \bullet\bullet \\ \hline \text{ } \circ\circ\bullet\bullet \\ \text{ } \circ\circ\bullet\bullet \end{array}$$

$$\begin{array}{r} 7 \text{ } \circ\circ\circ \\ + 4 \text{ } \bullet\bullet \\ \hline \text{ } \circ\circ\bullet\bullet \\ \text{ } \circ\circ\bullet\bullet \end{array}$$

$$\begin{array}{r} 9 \text{ } \circ\circ\circ \\ + 4 \text{ } \bullet\bullet \\ \hline \text{ } \circ\circ\bullet\bullet \\ \text{ } \circ\circ\bullet\bullet \end{array}$$

$$\begin{array}{r} 8 \text{ } \circ\circ\circ \\ + 1 \text{ } \bullet \\ \hline \text{ } \circ\circ\bullet \\ \text{ } \circ\circ\bullet \end{array}$$

$$\begin{array}{r} 2 \text{ } \circ \\ + 7 \text{ } \bullet\bullet \\ \hline \text{ } \circ\bullet\bullet \\ \text{ } \circ\bullet\bullet \end{array}$$

$$\begin{array}{r} 6 \text{ } \circ\circ \\ + 6 \text{ } \bullet\bullet \\ \hline \text{ } \circ\circ\bullet\bullet \\ \text{ } \circ\circ\bullet\bullet \end{array}$$

$$\begin{array}{r} 7 \text{ } \circ\circ \\ + 2 \text{ } \bullet \\ \hline \text{ } \circ\circ\bullet \\ \text{ } \circ\circ\bullet \end{array}$$

$$\begin{array}{r} 7 \text{ } \circ\circ \\ + 1 \text{ } \bullet \\ \hline \text{ } \circ\circ\bullet \\ \text{ } \circ\circ\bullet \end{array}$$

$$\begin{array}{r} 2 \circ \\ + 1 \cdot \\ \hline \circ \end{array}$$

$$\begin{array}{r} 2 \circ \\ + 5 \bullet \bullet \bullet \\ \hline \bullet \bullet \bullet \end{array}$$

$$\begin{array}{r} 6 \circ \circ \\ + 1 \cdot \\ \hline \circ \circ \end{array}$$

$$\begin{array}{r} 1 \circ \\ + 8 \bullet \bullet \bullet \bullet \\ \hline \bullet \bullet \bullet \bullet \end{array}$$

$$\begin{array}{r} 9 \circ \circ \circ \\ + 1 \cdot \\ \hline \circ \circ \circ \bullet \end{array}$$

$$\begin{array}{r} 9 \circ \circ \circ \\ + 5 \bullet \bullet \bullet \\ \hline \circ \circ \circ \bullet \bullet \bullet \end{array}$$

$$\begin{array}{r} 5 \circ \circ \\ + 5 \bullet \bullet \bullet \\ \hline \circ \circ \bullet \bullet \end{array}$$

$$\begin{array}{r} 4 \circ \circ \\ + 2 \bullet \\ \hline \circ \circ \end{array}$$

$$\begin{array}{r} 7 \circ \circ \\ + 8 \bullet \bullet \bullet \bullet \\ \hline \circ \circ \bullet \bullet \bullet \bullet \end{array}$$

$$\begin{array}{r} 6 \circ \circ \\ + 4 \bullet \bullet \bullet \\ \hline \circ \circ \bullet \bullet \end{array}$$

$$\begin{array}{r} 1 \circ \\ + 9 \bullet \bullet \bullet \bullet \\ \hline \bullet \bullet \bullet \bullet \end{array}$$

$$\begin{array}{r} 7 \circ \circ \\ + 7 \bullet \bullet \bullet \bullet \\ \hline \circ \circ \bullet \bullet \bullet \bullet \end{array}$$

$$\begin{array}{r} 3 \text{ } \circ \circ \\ + 5 \text{ } \bullet \bullet \bullet \\ \hline \text{ } \circ \circ \bullet \bullet \end{array}$$

$$\begin{array}{r} 6 \text{ } \circ \circ \circ \\ + 2 \text{ } \bullet \\ \hline \text{ } \circ \circ \bullet \bullet \end{array}$$

$$\begin{array}{r} 9 \text{ } \circ \circ \circ \circ \\ + 2 \text{ } \bullet \\ \hline \text{ } \circ \circ \circ \circ \bullet \bullet \end{array}$$

$$\begin{array}{r} 1 \text{ } \circ \\ + 7 \text{ } \bullet \bullet \bullet \bullet \\ \hline \text{ } \bullet \bullet \bullet \bullet \end{array}$$

$$\begin{array}{r} 4 \text{ } \circ \circ \\ + 2 \text{ } \bullet \\ \hline \text{ } \circ \circ \bullet \bullet \end{array}$$

$$\begin{array}{r} 8 \text{ } \circ \circ \circ \circ \\ + 3 \text{ } \bullet \bullet \\ \hline \text{ } \circ \circ \circ \circ \bullet \bullet \end{array}$$

$$\begin{array}{r} 4 \text{ } \circ \circ \\ + 4 \text{ } \bullet \bullet \\ \hline \text{ } \circ \circ \bullet \bullet \end{array}$$

$$\begin{array}{r} 8 \text{ } \circ \circ \circ \circ \\ + 8 \text{ } \bullet \bullet \bullet \bullet \\ \hline \text{ } \circ \circ \circ \circ \bullet \bullet \bullet \bullet \end{array}$$

$$\begin{array}{r} 5 \text{ } \circ \circ \\ + 6 \text{ } \bullet \bullet \bullet \\ \hline \text{ } \circ \circ \bullet \bullet \bullet \end{array}$$

$$\begin{array}{r} 7 \text{ } \circ \circ \circ \\ + 9 \text{ } \bullet \bullet \bullet \bullet \\ \hline \text{ } \circ \circ \bullet \bullet \bullet \bullet \bullet \bullet \end{array}$$

$$\begin{array}{r} 6 \text{ } \circ \circ \circ \\ + 1 \text{ } \bullet \\ \hline \text{ } \circ \circ \bullet \bullet \end{array}$$

$$\begin{array}{r} 9 \text{ } \circ \circ \circ \circ \\ + 5 \text{ } \bullet \bullet \bullet \\ \hline \text{ } \circ \circ \circ \circ \bullet \bullet \bullet \end{array}$$

$$\begin{array}{r} 4 \text{ } \circ\circ \\ + 3 \text{ } \bullet\bullet \\ \hline \text{ } \circ\circ\bullet\bullet \end{array}$$

$$\begin{array}{r} 3 \text{ } \circ\circ \\ + 1 \text{ } \bullet \\ \hline \text{ } \circ\circ\bullet \end{array}$$

$$\begin{array}{r} 1 \text{ } \circ \\ + 4 \text{ } \bullet\bullet\bullet \\ \hline \text{ } \circ\circ\bullet\bullet \end{array}$$

$$\begin{array}{r} 7 \text{ } \circ\circ\circ \\ + 9 \text{ } \bullet\bullet\bullet\bullet \\ \hline \text{ } \circ\circ\circ\bullet\bullet\bullet\bullet \end{array}$$

$$\begin{array}{r} 9 \text{ } \circ\circ\circ \\ + 5 \text{ } \bullet\bullet\bullet \\ \hline \text{ } \circ\circ\circ\bullet\bullet\bullet \end{array}$$

$$\begin{array}{r} 3 \text{ } \circ\circ \\ + 8 \text{ } \bullet\bullet\bullet\bullet \\ \hline \text{ } \circ\circ\bullet\bullet\bullet\bullet \end{array}$$

$$\begin{array}{r} 2 \text{ } \circ \\ + 8 \text{ } \bullet\bullet\bullet\bullet \\ \hline \text{ } \circ\circ\bullet\bullet\bullet \end{array}$$

$$\begin{array}{r} 9 \text{ } \circ\circ\circ \\ + 3 \text{ } \bullet\bullet \\ \hline \text{ } \circ\circ\circ\bullet\bullet \end{array}$$

$$\begin{array}{r} 5 \text{ } \circ\circ \\ + 6 \text{ } \bullet\bullet\bullet \\ \hline \text{ } \circ\circ\bullet\bullet\bullet \end{array}$$

$$\begin{array}{r} 3 \text{ } \circ\circ \\ + 5 \text{ } \bullet\bullet\bullet \\ \hline \text{ } \circ\circ\bullet\bullet\bullet \end{array}$$

$$\begin{array}{r} 8 \text{ } \circ\circ\circ \\ + 9 \text{ } \bullet\bullet\bullet\bullet \\ \hline \text{ } \circ\circ\circ\bullet\bullet\bullet\bullet \end{array}$$

$$\begin{array}{r} 4 \text{ } \circ\circ \\ + 5 \text{ } \bullet\bullet\bullet \\ \hline \text{ } \circ\circ\bullet\bullet\bullet \end{array}$$



$4 - 2 = \underline{\quad}$



$7 - 6 = \underline{\quad}$



$7 - 4 = \underline{\quad}$



$3 - 1 = \underline{\quad}$



$9 - 6 = \underline{\quad}$



$$10 - 9 = \underline{\quad}$$



$$2 - 1 = \underline{\quad}$$



$$10 - 4 = \underline{\quad}$$



$$8 - 6 = \underline{\quad}$$




$$4 - 1 = \underline{\quad}$$



$10 - 7 = \underline{\quad}$



$10 - 6 = \underline{\quad}$



$8 - 7 = \underline{\quad}$



$7 - 6 = \underline{\quad}$



$3 - 2 = \underline{\quad}$



$10 - 5 = \underline{\quad}$



$9 - 4 = \underline{\quad}$



$8 - 3 = \underline{\quad}$



$10 - 2 = \underline{\quad}$



$5 - 4 = \underline{\quad}$



$9 - 2 = \underline{\quad}$



$9 - 1 = \underline{\quad}$



$10 - 8 = \underline{\quad}$



$9 - 3 = \underline{\quad}$



$2 - 1 = \underline{\quad}$

$$\begin{array}{r} 8 \text{ (8 black dots)} \\ - 6 \text{ (6 white dots)} \\ \hline \end{array}$$

$$\begin{array}{r} 6 \text{ (6 black dots)} \\ - 5 \text{ (5 white dots)} \\ \hline \end{array}$$

$$\begin{array}{r} 10 \text{ (10 black dots)} \\ - 1 \text{ (1 white dot)} \\ \hline \end{array}$$

$$\begin{array}{r} 5 \text{ (5 black dots)} \\ - 4 \text{ (4 white dots)} \\ \hline \end{array}$$

$$\begin{array}{r} 7 \text{ (7 black dots)} \\ - 1 \text{ (1 white dot)} \\ \hline \end{array}$$

$$\begin{array}{r} 10 \text{ (10 black dots)} \\ - 6 \text{ (6 white dots)} \\ \hline \end{array}$$

$$\begin{array}{r} 3 \text{ (3 black dots)} \\ - 1 \text{ (1 white dot)} \\ \hline \end{array}$$

$$\begin{array}{r} 11 \text{ (11 black dots)} \\ - 9 \text{ (9 white dots)} \\ \hline \end{array}$$

$$\begin{array}{r} 6 \text{ (6 black dots)} \\ - 2 \text{ (2 white dots)} \\ \hline \end{array}$$

$$\begin{array}{r} 17 \text{ (17 black dots)} \\ - 8 \text{ (8 white dots)} \\ \hline \end{array}$$

$$\begin{array}{r} 11 \text{ (11 black dots)} \\ - 8 \text{ (8 white dots)} \\ \hline \end{array}$$

$$\begin{array}{r} 14 \text{ (14 black dots)} \\ - 6 \text{ (6 white dots)} \\ \hline \end{array}$$

$$\begin{array}{r} 8 \text{ (8 dots)} \\ - 6 \text{ (6 dots)} \\ \hline \end{array}$$

$$\begin{array}{r} 13 \text{ (13 dots)} \\ - 5 \text{ (5 dots)} \\ \hline \end{array}$$

$$\begin{array}{r} 16 \text{ (16 dots)} \\ - 7 \text{ (7 dots)} \\ \hline \end{array}$$

$$\begin{array}{r} 11 \text{ (11 dots)} \\ - 3 \text{ (3 dots)} \\ \hline \end{array}$$

$$\begin{array}{r} 9 \text{ (9 dots)} \\ - 6 \text{ (6 dots)} \\ \hline \end{array}$$

$$\begin{array}{r} 12 \text{ (12 dots)} \\ - 7 \text{ (7 dots)} \\ \hline \end{array}$$

$$\begin{array}{r} 9 \text{ (9 dots)} \\ - 1 \text{ (1 dot)} \\ \hline \end{array}$$

$$\begin{array}{r} 13 \text{ (13 dots)} \\ - 9 \text{ (9 dots)} \\ \hline \end{array}$$

$$\begin{array}{r} 10 \text{ (10 dots)} \\ - 1 \text{ (1 dot)} \\ \hline \end{array}$$

$$\begin{array}{r} 9 \text{ (9 dots)} \\ - 2 \text{ (2 dots)} \\ \hline \end{array}$$

$$\begin{array}{r} 9 \text{ (9 dots)} \\ - 7 \text{ (7 dots)} \\ \hline \end{array}$$

$$\begin{array}{r} 11 \text{ (11 dots)} \\ - 6 \text{ (6 dots)} \\ \hline \end{array}$$

$$\begin{array}{r} 12 \text{ (12 dots)} \\ - 6 \text{ (6 dots)} \\ \hline \end{array}$$

$$\begin{array}{r} 9 \text{ (9 dots)} \\ - 4 \text{ (4 dots)} \\ \hline \end{array}$$

$$\begin{array}{r} 17 \text{ (17 dots)} \\ - 9 \text{ (9 dots)} \\ \hline \end{array}$$

$$\begin{array}{r} 8 \text{ (8 dots)} \\ - 2 \text{ (2 dots)} \\ \hline \end{array}$$

$$\begin{array}{r} 6 \text{ (6 dots)} \\ - 1 \text{ (1 dot)} \\ \hline \end{array}$$

$$\begin{array}{r} 12 \text{ (12 dots)} \\ - 9 \text{ (9 dots)} \\ \hline \end{array}$$

$$\begin{array}{r} 13 \text{ (13 dots)} \\ - 6 \text{ (6 dots)} \\ \hline \end{array}$$

$$\begin{array}{r} 7 \text{ (7 dots)} \\ - 6 \text{ (6 dots)} \\ \hline \end{array}$$

$$\begin{array}{r} 12 \text{ (12 dots)} \\ - 4 \text{ (4 dots)} \\ \hline \end{array}$$

$$\begin{array}{r} 7 \text{ (7 dots)} \\ - 4 \text{ (4 dots)} \\ \hline \end{array}$$

$$\begin{array}{r} 12 \text{ (12 dots)} \\ - 7 \text{ (7 dots)} \\ \hline \end{array}$$

$$\begin{array}{r} 12 \text{ (12 dots)} \\ - 3 \text{ (3 dots)} \\ \hline \end{array}$$

$$\begin{array}{r} 12 \text{ (12 dots)} \\ - 3 \text{ (3 dots)} \\ \hline \end{array}$$

$$\begin{array}{r} 12 \text{ (12 dots)} \\ - 4 \text{ (4 dots)} \\ \hline \end{array}$$

$$\begin{array}{r} 11 \text{ (11 dots)} \\ - 9 \text{ (9 dots)} \\ \hline \end{array}$$

$$\begin{array}{r} 10 \text{ (10 dots)} \\ - 9 \text{ (9 dots)} \\ \hline \end{array}$$

$$\begin{array}{r} 4 \text{ (4 dots)} \\ - 3 \text{ (3 dots)} \\ \hline \end{array}$$

$$\begin{array}{r} 8 \text{ (8 dots)} \\ - 7 \text{ (7 dots)} \\ \hline \end{array}$$

$$\begin{array}{r} 14 \text{ (14 dots)} \\ - 6 \text{ (6 dots)} \\ \hline \end{array}$$

$$\begin{array}{r} 13 \text{ (13 dots)} \\ - 5 \text{ (5 dots)} \\ \hline \end{array}$$

$$\begin{array}{r} 9 \text{ (9 dots)} \\ - 6 \text{ (6 dots)} \\ \hline \end{array}$$

$$\begin{array}{r} 4 \text{ (4 dots)} \\ - 2 \text{ (2 dots)} \\ \hline \end{array}$$

$$\begin{array}{r} 7 \text{ (7 dots)} \\ - 6 \text{ (6 dots)} \\ \hline \end{array}$$

$$\begin{array}{r} 10 \text{ (10 dots)} \\ - 8 \text{ (8 dots)} \\ \hline \end{array}$$

$$\begin{array}{r} 12 \text{ (12 dots)} \\ - 7 \text{ (7 dots)} \\ \hline \end{array}$$

$$\begin{array}{r} 11 \text{ (11 dots)} \\ - 5 \text{ (5 dots)} \\ \hline \end{array}$$

$$\begin{array}{r} 8 \text{ (8 dots)} \\ - 2 \text{ (2 dots)} \\ \hline \end{array}$$

$$\begin{array}{r} 10 \text{ (10 dots)} \\ - 8 \text{ (8 dots)} \\ \hline \end{array}$$

$$\begin{array}{r} 13 \text{ (13 dots)} \\ - 5 \text{ (5 dots)} \\ \hline \end{array}$$

$$\begin{array}{r} 14 \text{ (14 dots)} \\ - 5 \text{ (5 dots)} \\ \hline \end{array}$$

$$\begin{array}{r} 13 \text{ (13 dots)} \\ - 6 \text{ (6 dots)} \\ \hline \end{array}$$


$$\begin{array}{r} 9 \text{ (9 dots)} \\ - 5 \text{ (5 dots)} \\ \hline \end{array}$$

$$\begin{array}{r} 17 \text{ (17 dots)} \\ - 8 \text{ (8 dots)} \\ \hline \end{array}$$

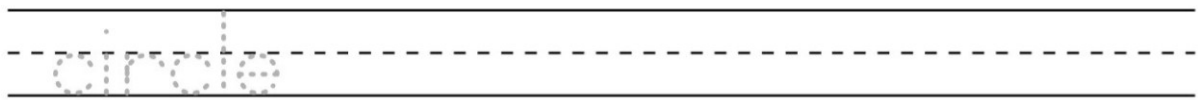
$$\begin{array}{r} 14 \text{ (14 dots)} \\ - 6 \text{ (6 dots)} \\ \hline \end{array}$$

$$\begin{array}{r} 5 \text{ (5 dots)} \\ - 4 \text{ (4 dots)} \\ \hline \end{array}$$

$$\begin{array}{r} 7 \text{ (7 dots)} \\ - 2 \text{ (2 dots)} \\ \hline \end{array}$$

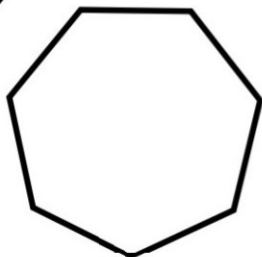
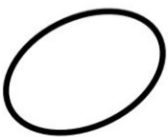



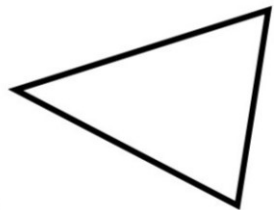


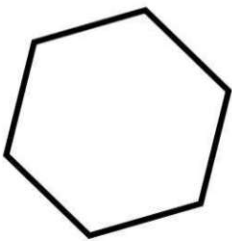


circle



A circle has ___ sides.

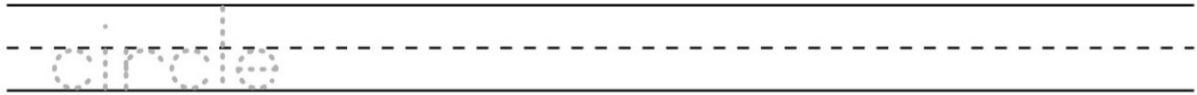
Color in each circle.



Answer Key

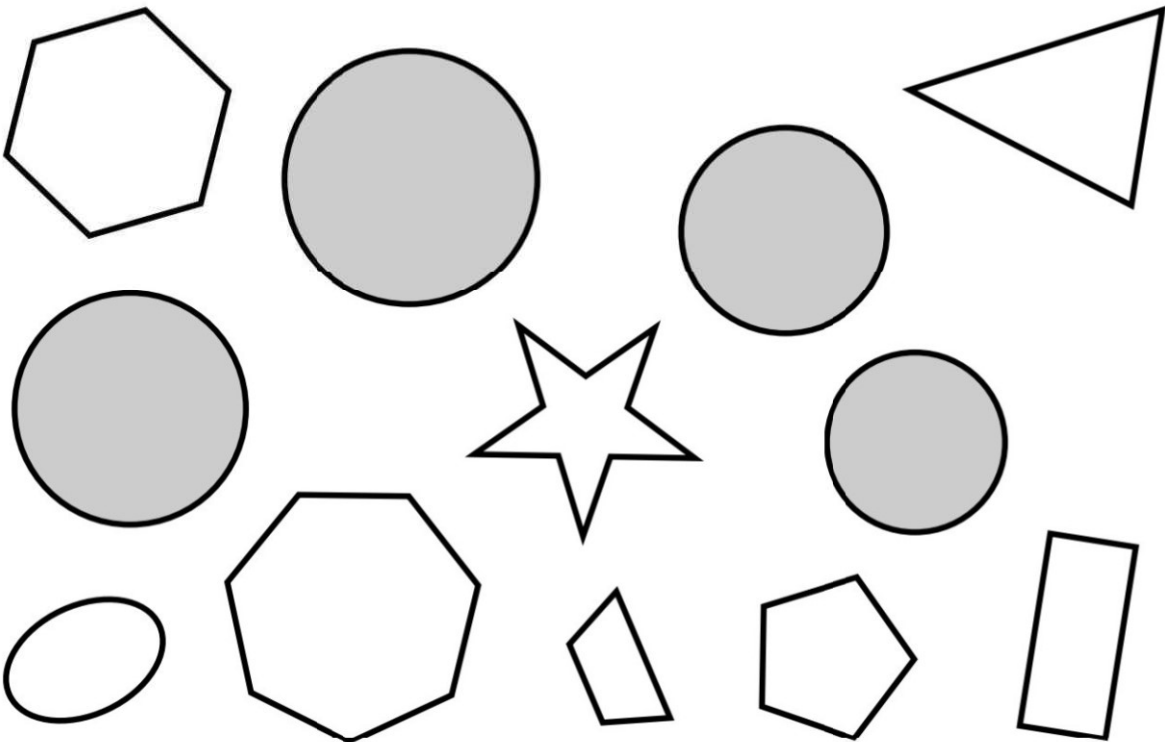


circle



A circle has 0 sides.

Color in each circle.



Cross out the equations that are incorrect.

$$5 + 10 + 4 = 4 + 14$$

$$1 + 6 + 2 = 10$$

$$1 + 4 = 3 + 1 + 2$$

$$1 + 15 = 16$$

$$11 = 4 + 7$$

$$11 + 4 = 8 + 7$$

$$1 + 17 = 4 + 10 + 5$$

$$4 + 1 + 3 = 8$$

$$1 + 3 + 4 = 1 + 4 + 4$$

$$6 = 2 + 4$$

$$18 + 2 = 19$$

$$13 = 1 + 6 + 5$$

$$2 + 2 + 1 = 1 + 3$$

$$1 + 1 + 3 = 1 + 2 + 2$$

$$8 = 5 + 3$$

$$5 + 13 = 11 + 1 + 7$$

$$4 + 12 = 15$$

$$2 + 13 + 3 = 19$$

$$10 + 1 + 7 = 14 + 4$$

$$10 = 3 + 5 + 3$$

Cross out the equations that are incorrect.

$$16 = 11 + 1 + 3$$

$$2 + 3 + 8 = 4 + 6 + 4$$

$$3 + 9 = 12$$

$$20 = 2 + 18$$

$$19 = 13 + 4 + 1$$

$$15 + 1 = 1 + 13 + 2$$

$$5 + 3 = 1 + 8$$

$$6 + 2 + 1 = 1 + 8$$

$$14 = 10 + 5$$

$$1 + 6 = 8$$

$$6 + 3 + 1 = 6 + 1 + 3$$

$$4 + 2 + 3 = 9$$

$$3 + 2 + 2 = 8$$

$$15 = 3 + 12$$

$$11 + 4 + 1 = 9 + 3 + 4$$

$$1 + 8 = 5 + 1 + 2$$

$$11 + 7 = 9 + 9$$

$$5 + 4 + 6 = 5 + 9$$

$$10 = 6 + 1 + 3$$

$$4 + 8 = 11$$

Cross out the equations that are incorrect.

$$20 = 12 + 5 + 2$$

$$1 + 5 = 6$$

$$3 + 1 + 6 = 9$$

$$10 + 1 + 8 = 14 + 3 + 2$$

$$7 + 2 = 1 + 3 + 5$$

$$16 = 4 + 7 + 4$$

$$9 = 1 + 8$$

$$1 + 4 + 9 = 3 + 12$$

$$1 + 6 = 8$$

$$3 + 3 + 2 = 3 + 2 + 4$$

$$4 + 3 + 9 = 16$$

$$2 + 10 = 9 + 2$$

$$4 + 1 = 5$$

$$3 + 16 = 13 + 6$$

$$9 = 8 + 1$$

$$5 = 3 + 2 + 1$$

$$2 + 3 + 4 = 9$$

$$3 + 1 + 1 = 4 + 1 + 1$$

$$5 + 1 = 1 + 1 + 4$$

$$3 + 2 + 15 = 13 + 6$$

Cross out the equations that are incorrect.

$$6 + 8 + 3 = 7 + 1 + 9$$

$$4 + 3 = 8$$

$$4 + 6 + 3 = 13$$

$$9 + 3 = 2 + 3 + 7$$

$$18 = 14 + 4$$

$$10 = 1 + 8 + 1$$

$$12 = 8 + 5$$

$$3 + 15 = 7 + 3 + 9$$

$$1 + 3 + 2 = 3 + 4$$

$$4 + 4 = 1 + 7$$

$$11 + 1 = 11$$

$$1 + 7 + 3 = 12$$

$$19 = 6 + 9 + 4$$

$$11 + 7 = 19$$

$$2 + 4 + 3 = 6 + 2 + 1$$

$$8 + 6 = 2 + 2 + 9$$

$$13 + 6 = 12 + 6$$

$$9 = 4 + 6$$

$$1 + 1 + 9 = 2 + 9$$

$$7 + 5 + 3 = 15$$

Cross out the equations that are incorrect.

$$1 + 4 = 3 + 3$$

$$5 + 8 = 13$$

$$1 + 7 + 4 = 4 + 5 + 3$$

$$1 + 5 + 12 = 5 + 12$$

$$8 = 2 + 1 + 4$$

$$2 + 2 + 10 = 2 + 10 + 2$$

$$2 + 5 + 5 = 12$$

$$13 + 4 = 15 + 1$$

$$1 + 11 = 11$$

$$12 + 5 = 11 + 4 + 2$$

$$1 + 12 + 6 = 15 + 3$$

$$9 = 3 + 6$$

$$1 + 1 + 7 = 8 + 1 + 1$$

$$4 + 1 = 5$$

$$7 + 1 + 11 = 19$$


$$1 + 2 + 2 = 4 + 1$$

$$4 + 2 = 2 + 1 + 4$$

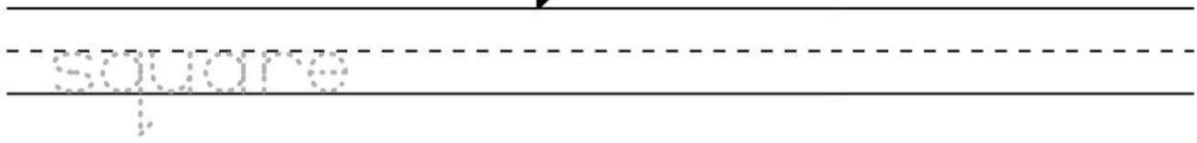
$$9 = 5 + 4 + 1$$

$$18 = 15 + 4$$

$$8 + 4 = 3 + 9$$





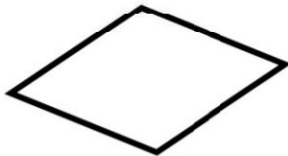


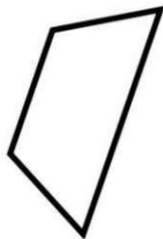
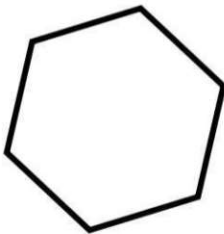


square




A square has ___ sides.

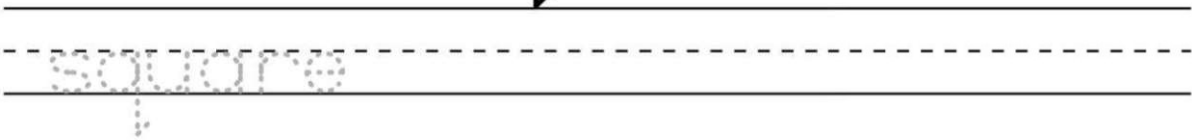
Color in each square.



Answer Key

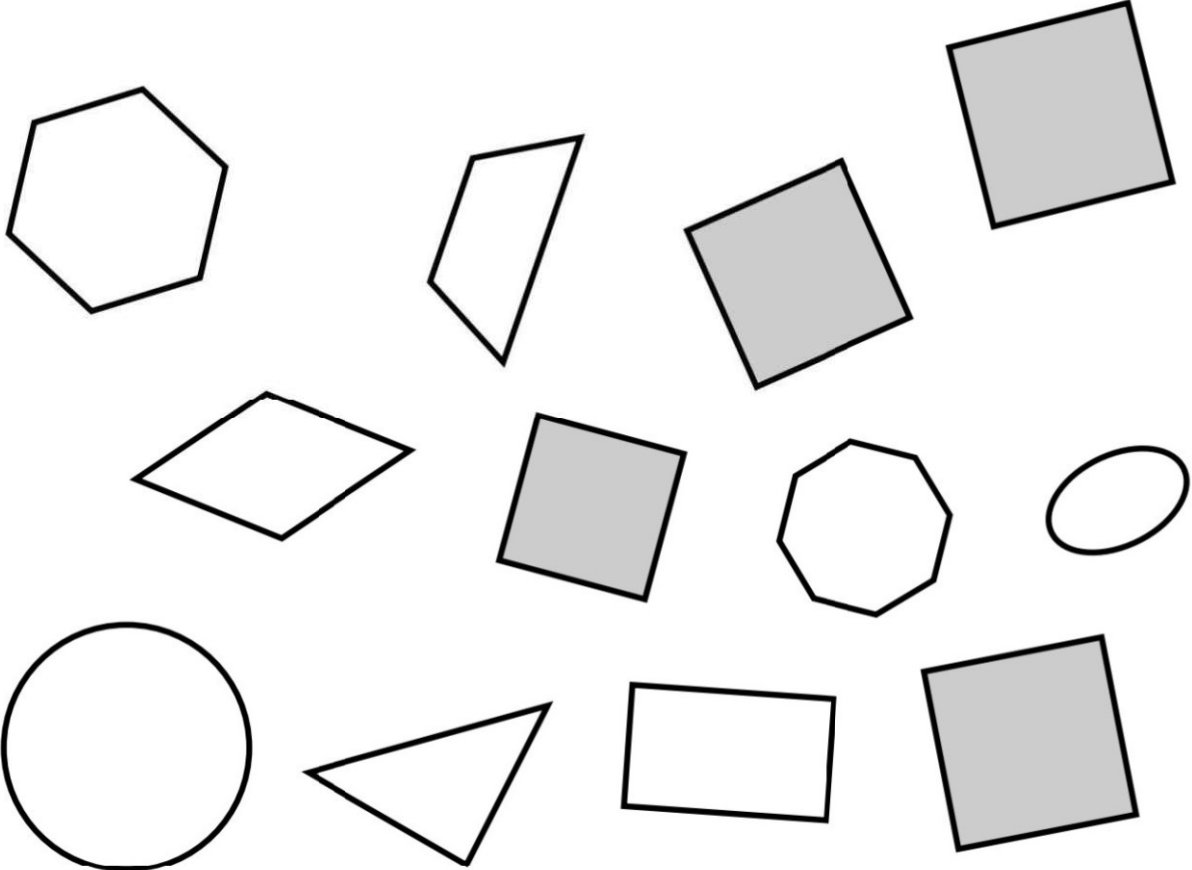


square



A square has 4 sides.

Color in each square.



Cross out the equations that are incorrect.

$$10 = 17 - 7$$

$$16 - 6 = 10$$

$$14 = 19 - 2 - 2$$

$$13 - 5 - 7 = 3 - 2$$

$$8 - 5 = 3$$

$$16 - 2 - 12 = 19 - 17$$

$$20 - 8 = 14 - 3$$

$$15 - 12 = 10 - 4 - 4$$

$$9 = 19 - 1 - 9$$

$$12 = 13 - 2$$

$$15 - 1 - 1 = 13$$

$$19 - 1 - 12 = 18 - 7 - 6$$

$$16 - 4 - 2 = 10$$

$$20 - 11 = 15 - 3 - 2$$

$$12 = 14 - 1$$

$$19 - 12 = 8 - 2$$

$$20 - 13 = 7$$

$$18 - 1 - 9 = 18 - 5 - 5$$

$$11 - 1 - 9 = 4 - 2$$

$$15 = 18 - 1 - 3$$

Cross out the equations that are incorrect.

$$7 = 17 - 5 - 5$$

$$18 - 3 = 16$$

$$17 - 1 - 3 = 18 - 6$$

$$16 - 4 = 20 - 1 - 8$$

$$12 - 5 - 3 = 19 - 2 - 13$$

$$16 - 7 = 10 - 1$$

$$10 = 19 - 3 - 6$$

$$3 = 17 - 13$$

$$16 - 9 - 2 = 4$$

$$17 - 4 = 18 - 2 - 3$$

$$13 - 8 = 4$$

$$20 - 1 - 8 = 16 - 5$$

$$10 = 13 - 3$$

$$5 = 19 - 6 - 7$$

$$12 - 12 = 0$$

$$10 - 6 = 6 - 1$$

$$13 - 1 = 19 - 1 - 6$$

$$19 - 1 - 11 = 8$$

$$18 - 2 - 8 = 18 - 9$$

$$17 - 5 - 11 = 18 - 14 - 3$$

Cross out the equations that are incorrect.

$$13 = 19 - 6 - 1$$

$$17 - 4 - 11 = 2$$

$$15 = 20 - 5$$

$$16 - 10 = 17 - 11$$

$$17 - 10 = 7$$

$$15 - 9 = 19 - 14$$

$$17 - 3 - 12 = 18 - 16 - 1$$

$$6 = 10 - 1 - 4$$

$$5 - 2 = 17 - 1 - 14$$

$$18 - 5 - 5 = 14 - 5$$

$$18 - 1 - 16 = 2$$

$$8 = 14 - 5$$

$$12 - 1 - 11 = 0$$

$$19 - 1 - 10 = 17 - 9$$

$$14 = 19 - 5$$

$$3 = 13 - 1 - 8$$

$$17 - 1 - 1 = 18 - 1 - 2$$

$$11 - 8 = 5 - 2$$

$$18 - 6 = 17 - 1 - 3$$

$$8 - 4 = 4$$

Cross out the equations that are incorrect.

$16 - 2 - 14 = 16 - 16$

$14 - 2 - 11 = 18 - 5 - 12$

$17 - 2 - 1 = 13$

$12 - 9 = 6 - 3$

$6 = 18 - 13$

$18 - 4 = 18 - 1 - 3$

$16 - 5 - 3 = 16 - 9$

$18 - 7 - 3 = 8$

$10 - 4 = 6$

$13 = 14 - 1 - 1$

$13 - 10 = 6 - 4$

$17 - 4 - 10 = 14 - 1 - 9$

$6 - 3 = 5 - 2$

$17 - 10 = 7$

$19 - 1 - 5 = 13$

$12 = 18 - 1 - 4$

$2 = 18 - 16$

$18 - 3 - 12 = 14 - 12$

$17 - 2 - 11 = 17 - 1 - 11$

$15 - 7 = 18 - 5 - 4$

Cross out the equations that are incorrect.

$$20 - 7 = 12$$

$$19 - 2 - 6 = 16 - 5$$

$$19 - 1 - 15 = 4$$

$$12 - 8 = 19 - 1 - 13$$

$$12 - 4 = 15 - 8$$

$$1 = 18 - 18$$

$$1 = 15 - 8 - 6$$

$$16 - 3 = 20 - 8$$

$$19 - 2 - 3 = 13$$

$$19 - 9 - 3 = 10 - 1 - 2$$

$$20 - 18 = 12 - 8 - 2$$

$$12 - 8 = 4$$

$$17 - 1 - 14 = 14 - 12$$

$$0 = 7 - 6$$

$$20 - 1 - 7 = 11$$

$$16 - 2 - 10 = 15 - 11$$

$$19 - 2 - 12 = 17 - 2 - 10$$

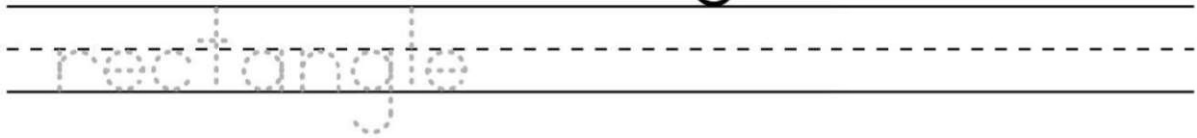
$$11 - 5 = 5$$

$$15 = 20 - 1 - 3$$

$$10 - 10 = 16 - 1 - 15$$




rectangle



A rectangle has ___ sides.

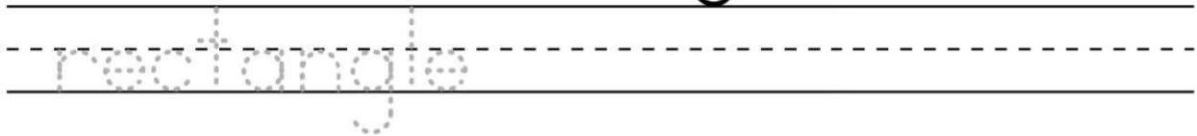
Color in each rectangle.



Answer Key




rectangle



A rectangle has 4 sides.

Color in each rectangle.



Cross out the equations that are incorrect.

$$16 - 2 = 4 + 1 + 9$$

$$3 + 3 + 2 = 1 + 2 + 6$$

$$5 = 3 + 1 + 2$$

$$3 + 1 + 1 = 16 - 11$$

$$3 + 1 + 5 = 9$$

$$14 = 19 - 6$$

$$5 = 1 + 1 + 3$$

$$1 + 10 = 10$$

$$2 + 6 + 3 = 5 + 5 + 2$$

$$2 + 7 = 15 - 5$$

$$2 + 2 + 1 = 11 - 6$$

$$18 - 4 = 19 - 1 - 3$$

$$19 - 11 = 1 + 1 + 5$$

$$17 - 11 - 1 = 1 + 5$$

$$19 - 10 = 13 - 3$$

$$9 = 19 - 9 - 1$$

$$18 - 2 - 8 = 1 + 6 + 1$$

$$11 = 13 - 2$$

$$19 - 1 - 3 = 15$$

$$18 - 5 = 13$$

Cross out the equations that are incorrect.

$$5 + 8 = 8 + 3 + 3$$

$$1 + 3 + 1 = 5$$

$$12 = 10 + 1$$

$$1 + 4 + 1 = 20 - 14$$

$$1 + 2 + 9 = 4 + 7$$

$$19 - 3 - 1 = 15$$

$$5 + 2 = 8$$

$$12 - 1 = 18 - 1 - 7$$

$$16 - 2 - 1 = 18 - 1 - 4$$

$$5 = 5 - 1$$

$$13 + 2 = 17 - 1$$

$$10 = 20 - 1 - 9$$

$$9 + 1 = 6 + 2 + 2$$

$$1 + 4 = 6$$

$$14 = 18 - 2 - 2$$

$$18 - 1 - 4 = 2 + 10$$

$$3 + 1 + 2 = 6$$

$$5 + 6 = 13 - 2$$

$$18 - 1 - 8 = 14 - 4 - 1$$

$$15 = 15 - 1$$

Cross out the equations that are incorrect.

$$1 + 6 = 17 - 6 - 4$$

$$11 = 18 - 7$$

$$16 - 8 = 11 - 3$$

$$19 - 3 - 5 = 7 + 1 + 2$$

$$1 + 2 + 2 = 5$$

$$14 = 19 - 1 - 4$$

$$6 + 3 + 4 = 3 + 9$$

$$10 = 12 - 1$$

$$19 - 14 = 2 + 4$$

$$3 + 12 = 20 - 1 - 5$$

$$18 - 5 = 13$$

$$4 + 4 + 1 = 4 + 2 + 3$$

$$18 - 5 = 13$$

$$17 - 11 = 19 - 12$$

$$15 = 20 - 1 - 4$$

$$10 = 13 - 3$$

$$14 - 2 - 7 = 6$$

$$2 + 5 + 5 = 9 + 2$$

$$1 + 6 = 1 + 4 + 3$$

$$3 + 2 + 6 = 3 + 5 + 4$$

Cross out the equations that are incorrect.

$$11 + 3 = 20 - 1 - 6$$

$$5 = 2 + 3 + 1$$

$$19 - 1 - 9 = 2 + 5 + 2$$

$$18 - 1 - 2 = 18 - 4$$

$$7 = 5 + 1$$

$$15 - 7 - 3 = 6$$

$$6 + 1 = 7$$

$$10 = 6 + 1 + 3$$

$$2 + 6 + 2 = 3 + 7$$

$$17 - 4 - 3 = 6 + 2 + 1$$

$$11 - 4 = 14 - 6$$

$$3 + 6 = 2 + 4 + 4$$

$$1 + 2 + 3 = 5 + 1$$

$$11 = 1 + 10$$

$$10 - 4 = 3 + 3$$

$$1 + 8 = 10$$

$$13 = 2 + 5 + 7$$

$$19 - 3 - 6 = 18 - 2 - 6$$

$$6 + 1 + 2 = 9$$

$$7 + 2 = 17 - 6 - 2$$

Cross out the equations that are incorrect.

$$18 - 11 - 2 = 6$$

$$16 - 4 = 13$$

$$4 + 5 + 2 = 2 + 8$$

$$17 - 10 - 2 = 2 + 1 + 1$$

$$19 - 12 - 1 = 8 - 3$$

$$6 = 20 - 1 - 13$$

$$4 + 2 = 7$$

$$1 + 14 = 2 + 2 + 11$$

$$2 + 5 + 1 = 8$$

$$6 + 1 + 1 = 4 + 2 + 3$$

$$12 = 14 - 2$$

$$3 + 5 = 12 - 4$$

$$19 - 4 - 1 = 20 - 6$$

$$6 + 7 = 5 + 5 + 4$$

$$7 = 2 + 2 + 2$$


$$5 = 19 - 14$$

$$5 + 1 = 2 + 5$$

$$2 + 4 = 6$$

$$1 + 3 + 2 = 6$$

$$19 - 1 - 8 = 4 + 3 + 3$$




triangle


triangle

A triangle has ___ sides.

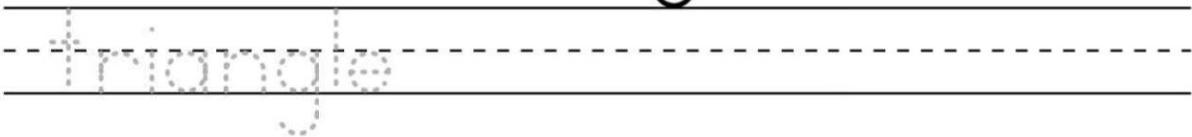
Color in each triangle.



Answer Key




triangle



A triangle has 3 sides.

Color in each triangle.



$$\begin{array}{r} \square 3 \\ + 2 \square \\ \hline 6 8 \end{array}$$

$$\begin{array}{r} 6 5 \\ + \square \square \\ \hline 7 7 \end{array}$$

$$\begin{array}{r} 5 \square \\ + 3 3 \\ \hline \square 9 \end{array}$$

$$\begin{array}{r} 3 \square \\ + \square 2 \\ \hline 6 7 \end{array}$$

$$\begin{array}{r} 3 4 \\ + 5 \square \\ \hline \square 6 \end{array}$$

$$\begin{array}{r} \square 2 \\ + 3 \square \\ \hline 4 8 \end{array}$$

$$\begin{array}{r} 7 \square \\ + 1 1 \\ \hline \square 9 \end{array}$$

$$\begin{array}{r} 7 \square \\ + 1 6 \\ \hline \square 8 \end{array}$$

$$\begin{array}{r} 4 \square \\ + \square 1 \\ \hline 6 9 \end{array}$$

$$\begin{array}{r} 5 2 \\ + \square \square \\ \hline 7 7 \end{array}$$

$$\begin{array}{r} 3 6 \\ + \square \square \\ \hline 5 7 \end{array}$$

$$\begin{array}{r} 4 3 \\ + \square 3 \\ \hline 5 \square \end{array}$$

$$\begin{array}{r} \square 5 \\ + 5 \square \\ \hline 8 7 \end{array}$$

$$\begin{array}{r} \square 5 \\ + 2 \square \\ \hline 6 7 \end{array}$$

$$\begin{array}{r} 4 3 \\ + \square 3 \\ \hline 7 \square \end{array}$$

$$\begin{array}{r} 4 \square \\ + \square 2 \\ \hline 6 8 \end{array}$$

$$\begin{array}{r} 2 4 \\ + \square 2 \\ \hline 3 \square \end{array}$$

$$\begin{array}{r} 5 \square \\ + \square 3 \\ \hline 8 7 \end{array}$$

$$\begin{array}{r} \square 3 \\ + 3 \square \\ \hline 6 4 \end{array}$$

$$\begin{array}{r} 7 5 \\ + \square 3 \\ \hline 9 \square \end{array}$$

$$\begin{array}{r} \square \square \\ + 1 2 \\ \hline 4 8 \end{array}$$

$$\begin{array}{r} 7 5 \\ + \square \square \\ \hline 8 6 \end{array}$$

$$\begin{array}{r} 4 \square \\ + \square 6 \\ \hline 8 8 \end{array}$$

$$\begin{array}{r} 6 5 \\ + \square 2 \\ \hline 8 \square \end{array}$$

$$\begin{array}{r} \square 4 \\ + 2 3 \\ \hline 5 \square \end{array}$$

$$\begin{array}{r} \square \square \\ + 3 3 \\ \hline 7 9 \end{array}$$

$$\begin{array}{r} 1 5 \\ + \square \square \\ \hline 5 8 \end{array}$$

$$\begin{array}{r} \square 4 \\ + 2 \square \\ \hline 7 7 \end{array}$$

$$\begin{array}{r} 5 3 \\ + \square 2 \\ \hline 7 \square \end{array}$$

$$\begin{array}{r} 3 2 \\ + \square \square \\ \hline 6 5 \end{array}$$

$$\begin{array}{r} \square \square \\ + 4 4 \\ \hline 8 6 \end{array}$$

$$\begin{array}{r} \square 5 \\ + 4 2 \\ \hline 7 \square \end{array}$$

$$\begin{array}{r} \square 2 \\ + 3 4 \\ \hline 8 \square \end{array}$$

$$\begin{array}{r} 4 \square \\ + \square 3 \\ \hline 5 6 \end{array}$$

$$\begin{array}{r} \square 3 \\ + 3 \square \\ \hline 5 7 \end{array}$$

$$\begin{array}{r} 6 \square \\ + \square 4 \\ \hline 7 7 \end{array}$$

$$\begin{array}{r} 22 \\ + \square 3 \\ \hline 3 \square \end{array}$$

$$\begin{array}{r} 8 \square \\ + \square 4 \\ \hline 97 \end{array}$$

$$\begin{array}{r} \square 2 \\ + 1 \square \\ \hline 54 \end{array}$$

$$\begin{array}{r} 3 \square \\ + \square 5 \\ \hline 58 \end{array}$$

$$\begin{array}{r} 62 \\ + \square 2 \\ \hline 7 \square \end{array}$$

$$\begin{array}{r} 43 \\ + \square \square \\ \hline 67 \end{array}$$

$$\begin{array}{r} 4 \square \\ + \square 2 \\ \hline 57 \end{array}$$

$$\begin{array}{r} \square 6 \\ + 5 \square \\ \hline 77 \end{array}$$

$$\begin{array}{r} \square \square \\ + 25 \\ \hline 77 \end{array}$$

$$\begin{array}{r} 3 \square \\ + 12 \\ \hline \square 4 \end{array}$$

$$\begin{array}{r} \square 5 \\ + 1 \square \\ \hline 86 \end{array}$$

$$\begin{array}{r} 34 \\ + \square \square \\ \hline 66 \end{array}$$

$$\begin{array}{r} 33 \\ + 2\ \square \\ \hline \square 8 \end{array}$$

$$\begin{array}{r} \square 8 \\ + 1\ \square \\ \hline 89 \end{array}$$

$$\begin{array}{r} 55 \\ + \square \square \\ \hline 78 \end{array}$$

$$\begin{array}{r} 3\ \square \\ + \square 5 \\ \hline 48 \end{array}$$

$$\begin{array}{r} \square 2 \\ + 3\ \square \\ \hline 54 \end{array}$$

$$\begin{array}{r} 64 \\ + \square 5 \\ \hline 8\ \square \end{array}$$

$$\begin{array}{r} \square 4 \\ + 4\ \square \\ \hline 77 \end{array}$$

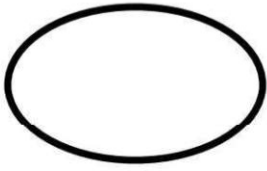
$$\begin{array}{r} \square 4 \\ + 4\ \square \\ \hline 76 \end{array}$$

$$\begin{array}{r} 2\ \square \\ + \square 1 \\ \hline 64 \end{array}$$

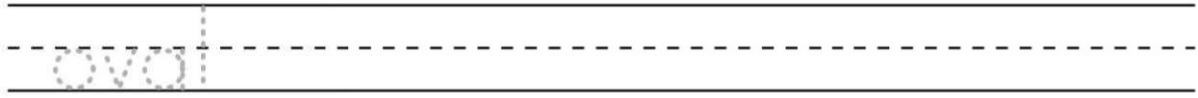
$$\begin{array}{r} \square 4 \\ + 3\ \square \\ \hline 85 \end{array}$$

$$\begin{array}{r} 6\ \square \\ + \square 3 \\ \hline 87 \end{array}$$

$$\begin{array}{r} 6\ \square \\ + \square 1 \\ \hline 96 \end{array}$$


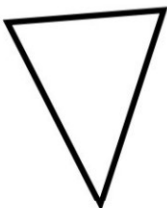
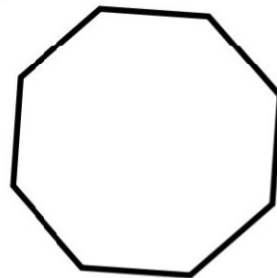

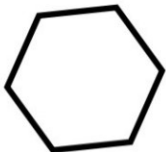
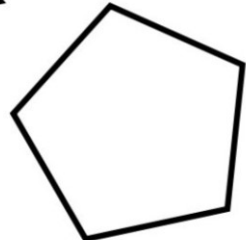


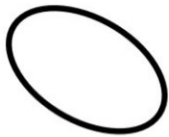


oval



A oval has ___ sides.

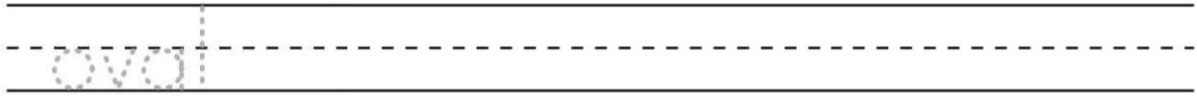
Color in each oval.



Answer Key




oval



A oval has 0 sides.

Color in each oval.



$$\begin{array}{r} 37 \\ - 1\ \square \\ \hline \square 4 \end{array}$$

$$\begin{array}{r} \square 6 \\ - 2\ \square \\ \hline 43 \end{array}$$

$$\begin{array}{r} 55 \\ - \square \square \\ \hline 43 \end{array}$$

$$\begin{array}{r} 67 \\ - \square 1 \\ \hline 5\ \square \end{array}$$

$$\begin{array}{r} \square 4 \\ - 12 \\ \hline 6\ \square \end{array}$$

$$\begin{array}{r} \square 9 \\ - 4\ \square \\ \hline 17 \end{array}$$

$$\begin{array}{r} 54 \\ - \square 2 \\ \hline 4\ \square \end{array}$$

$$\begin{array}{r} 75 \\ - \square 3 \\ \hline 4\ \square \end{array}$$

$$\begin{array}{r} 6\ \square \\ - \square 1 \\ \hline 45 \end{array}$$

$$\begin{array}{r} 63 \\ - 3\ \square \\ \hline \square 1 \end{array}$$

$$\begin{array}{r} 5\ \square \\ - \square 2 \\ \hline 33 \end{array}$$

$$\begin{array}{r} 3\ \square \\ - 12 \\ \hline \square 5 \end{array}$$

$$\begin{array}{r} \square \square \\ - 62 \\ \hline 21 \end{array}$$

$$\begin{array}{r} 55 \\ - \square \square \\ \hline 34 \end{array}$$

$$\begin{array}{r} \square 7 \\ - 6 \square \\ \hline 35 \end{array}$$

$$\begin{array}{r} 9 \square \\ - 52 \\ \hline \square 6 \end{array}$$

$$\begin{array}{r} 56 \\ - \square \square \\ \hline 22 \end{array}$$

$$\begin{array}{r} 7 \square \\ - 32 \\ \hline \square 2 \end{array}$$

$$\begin{array}{r} \square 9 \\ - 3 \square \\ \hline 27 \end{array}$$

$$\begin{array}{r} 88 \\ - \square \square \\ \hline 45 \end{array}$$

$$\begin{array}{r} 6 \square \\ - 41 \\ \hline \square 5 \end{array}$$

$$\begin{array}{r} 78 \\ - \square \square \\ \hline 47 \end{array}$$

$$\begin{array}{r} \square \square \\ - 13 \\ \hline 13 \end{array}$$

$$\begin{array}{r} 38 \\ - \square 2 \\ \hline 2 \square \end{array}$$

$$\begin{array}{r} \square \square \\ - 22 \\ \hline 44 \end{array}$$

$$\begin{array}{r} \square 6 \\ - 23 \\ \hline 5 \square \end{array}$$

$$\begin{array}{r} 6 \square \\ - 32 \\ \hline \square 3 \end{array}$$

$$\begin{array}{r} 69 \\ - \square \square \\ \hline 56 \end{array}$$

$$\begin{array}{r} 85 \\ - \square 3 \\ \hline 5 \square \end{array}$$

$$\begin{array}{r} 7 \square \\ - \square 1 \\ \hline 45 \end{array}$$

$$\begin{array}{r} \square 6 \\ - 2 \square \\ \hline 44 \end{array}$$

$$\begin{array}{r} 57 \\ - \square \square \\ \hline 43 \end{array}$$

$$\begin{array}{r} 7 \square \\ - \square 4 \\ \hline 43 \end{array}$$

$$\begin{array}{r} 75 \\ - \square \square \\ \hline 43 \end{array}$$

$$\begin{array}{r} \square 8 \\ - 2 \square \\ \hline 54 \end{array}$$

$$\begin{array}{r} \square 3 \\ - 1 \square \\ \hline 62 \end{array}$$

$$\begin{array}{r} 8 \square \\ - \square 5 \\ \hline 6 2 \end{array}$$

$$\begin{array}{r} 9 7 \\ - 5 \square \\ \hline \square 4 \end{array}$$

$$\begin{array}{r} 5 8 \\ - 1 \square \\ \hline \square 3 \end{array}$$

$$\begin{array}{r} \square 8 \\ - 3 4 \\ \hline 4 \square \end{array}$$

$$\begin{array}{r} \square \square \\ - 1 1 \\ \hline 6 5 \end{array}$$

$$\begin{array}{r} \square 6 \\ - 5 \square \\ \hline 1 5 \end{array}$$

$$\begin{array}{r} \square 7 \\ - 2 \square \\ \hline 2 5 \end{array}$$

$$\begin{array}{r} 5 \square \\ - 2 3 \\ \hline \square 3 \end{array}$$

$$\begin{array}{r} 8 \square \\ - \square 1 \\ \hline 7 3 \end{array}$$

$$\begin{array}{r} 8 5 \\ - 3 \square \\ \hline \square 4 \end{array}$$

$$\begin{array}{r} \square 5 \\ - 2 \square \\ \hline 3 3 \end{array}$$

$$\begin{array}{r} \square \square \\ - 1 2 \\ \hline 4 5 \end{array}$$

$$\begin{array}{r} \square 9 \\ - 3 1 \\ \hline 5 \square \end{array}$$

$$\begin{array}{r} \square 8 \\ - 4 \square \\ \hline 2 6 \end{array}$$

$$\begin{array}{r} \square 8 \\ - 4 \square \\ \hline 3 7 \end{array}$$

$$\begin{array}{r} \square \square \\ - 1 1 \\ \hline 4 7 \end{array}$$

$$\begin{array}{r} \square 5 \\ - 3 1 \\ \hline 4 \square \end{array}$$

$$\begin{array}{r} 5 5 \\ - 1 \square \\ \hline \square 4 \end{array}$$

$$\begin{array}{r} \square \square \\ - 1 1 \\ \hline 1 5 \end{array}$$


$$\begin{array}{r} 6 8 \\ - 4 \square \\ \hline \square 7 \end{array}$$

$$\begin{array}{r} 8 \square \\ - 1 2 \\ \hline \square 3 \end{array}$$

$$\begin{array}{r} \square \square \\ - 1 3 \\ \hline 4 3 \end{array}$$

$$\begin{array}{r} 7 \square \\ - \square 1 \\ \hline 2 2 \end{array}$$

$$\begin{array}{r} \square 5 \\ - 2 \square \\ \hline 5 2 \end{array}$$

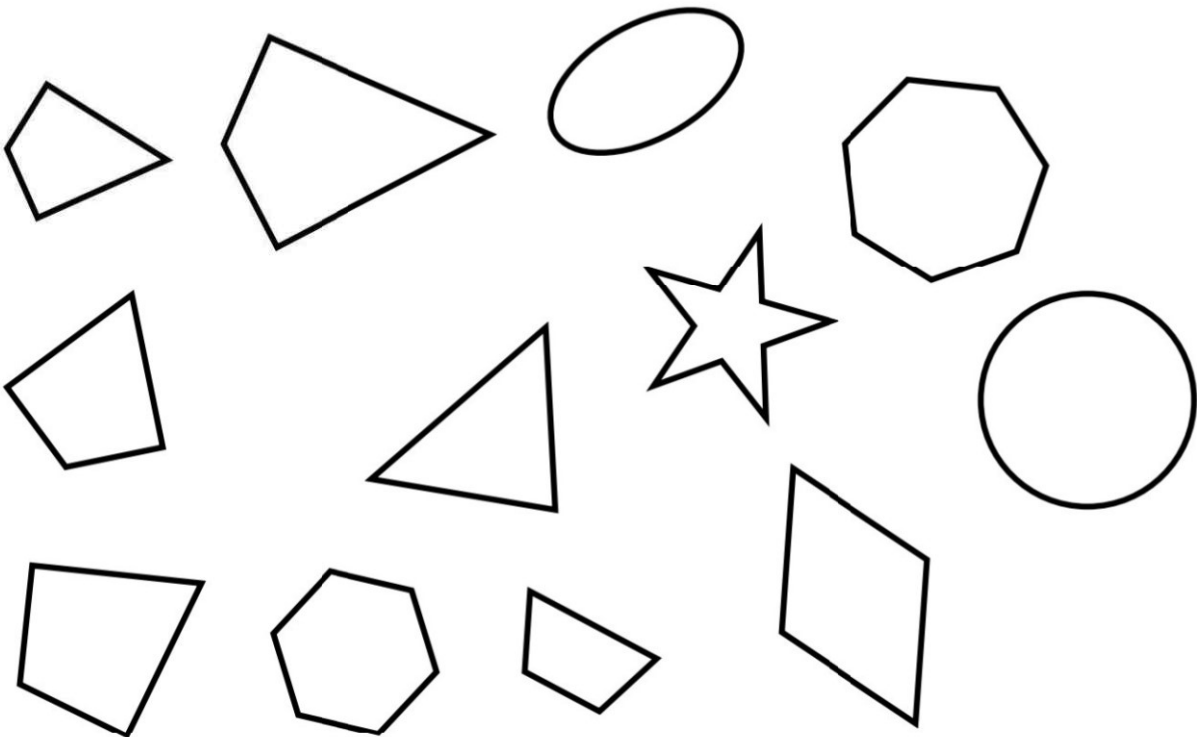


kite

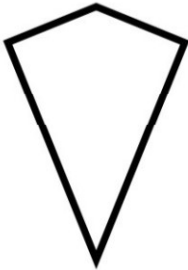
kite

A kite has ___ sides.

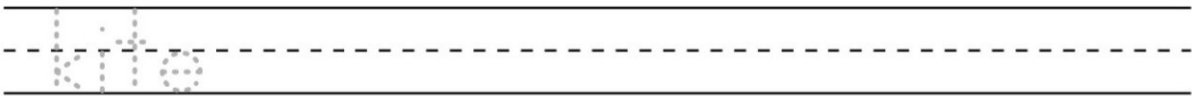
Color in each kite.



Answer Key

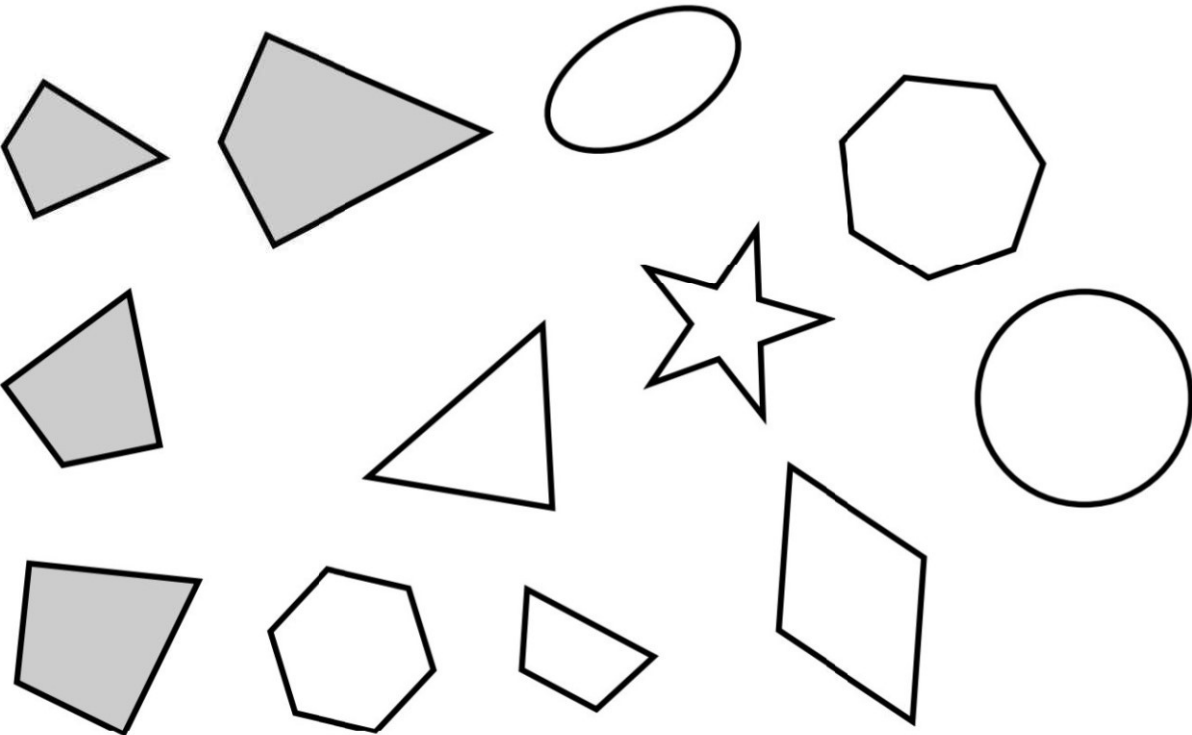


kite

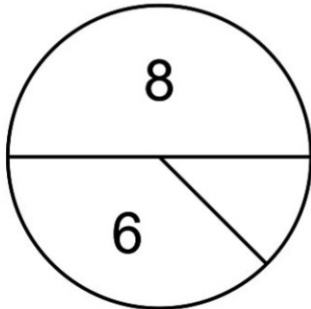
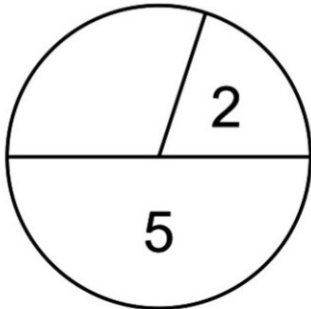
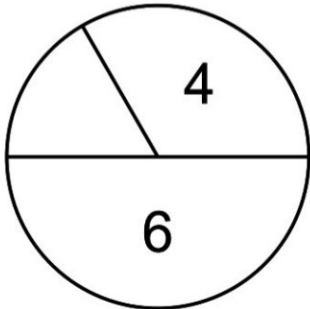
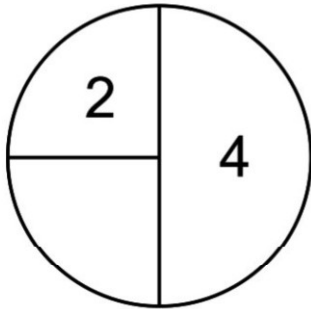
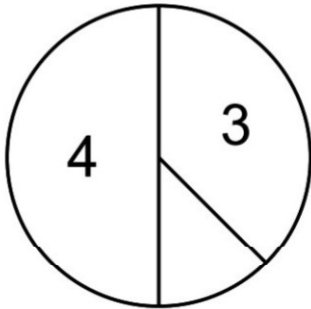
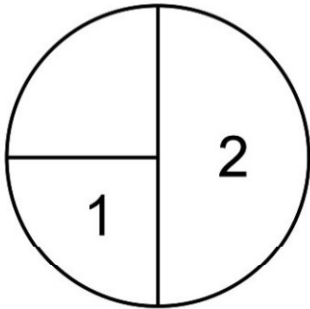
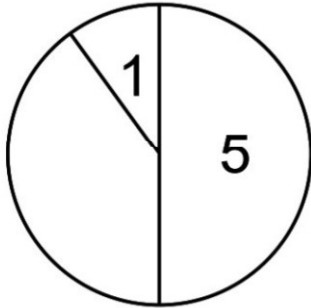
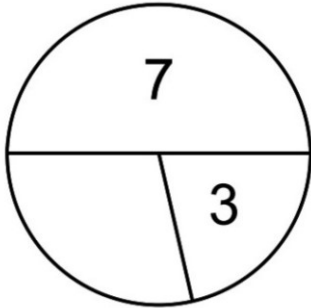
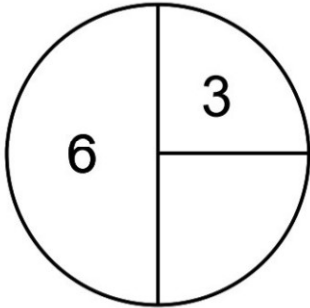
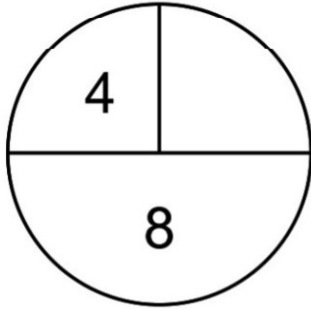
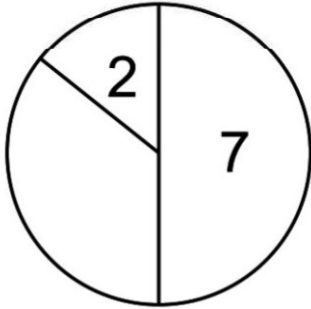
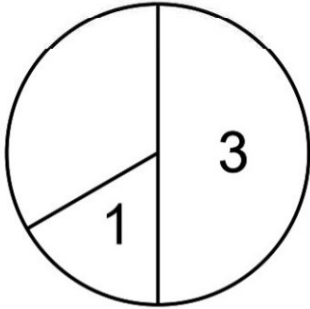


A kite has 4 sides.

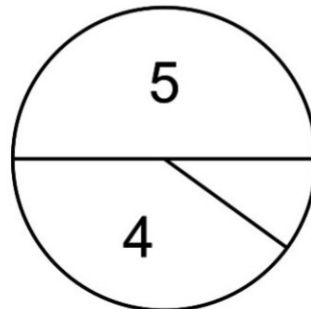
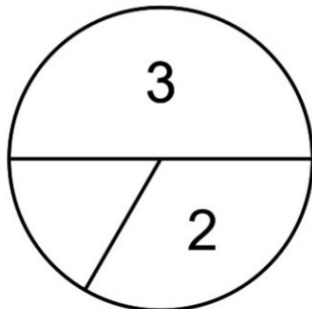
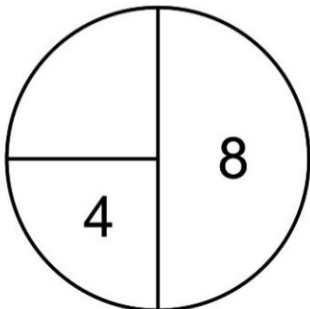
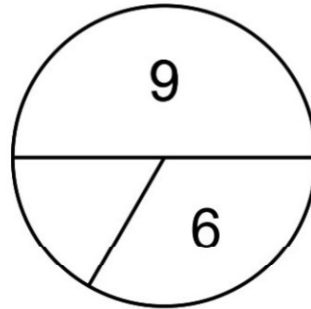
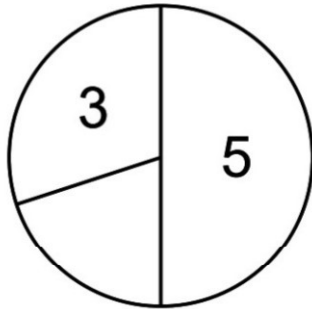
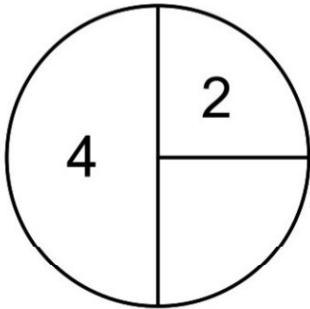
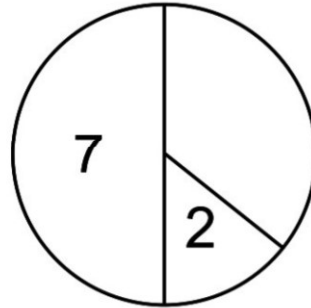
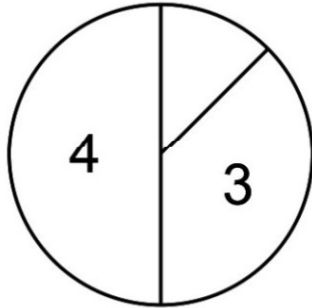
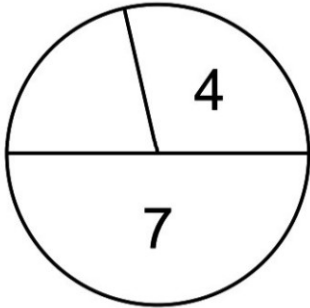
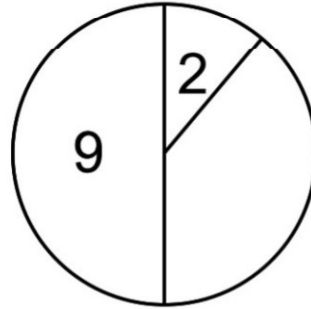
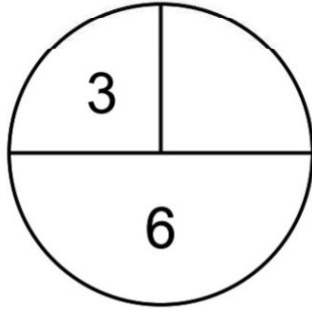
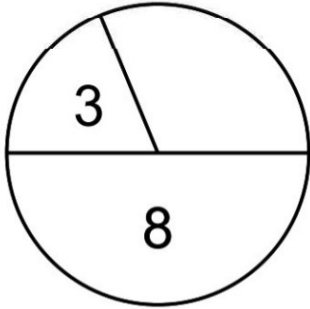
Color in each kite.



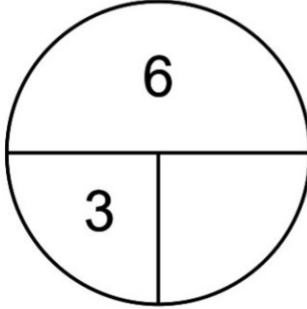
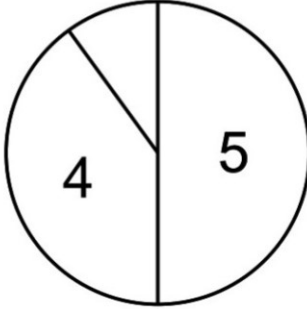
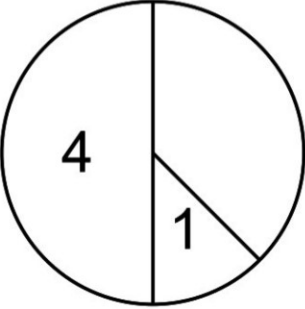
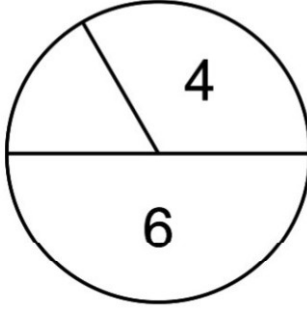
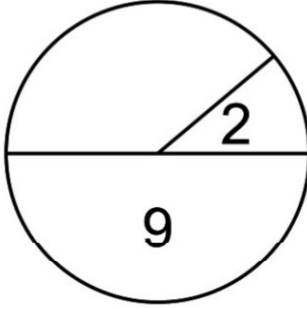
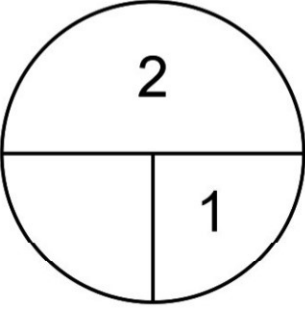
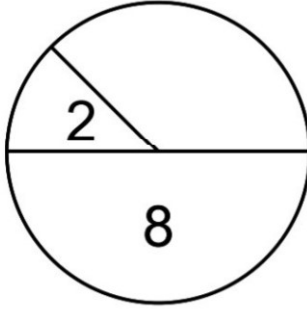
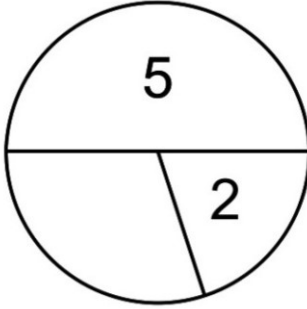
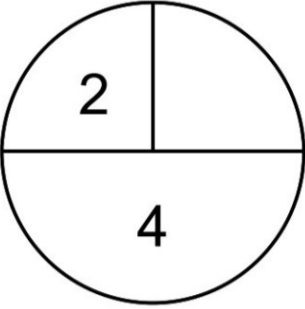
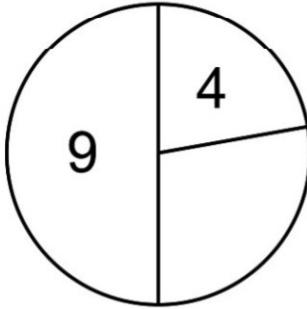
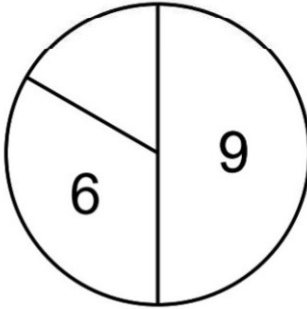
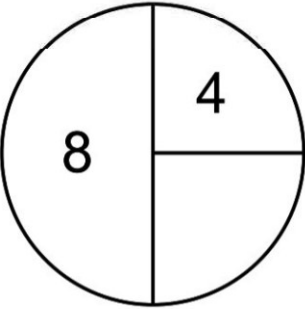
Part, Part, Whole. Fill in the missing numbers.



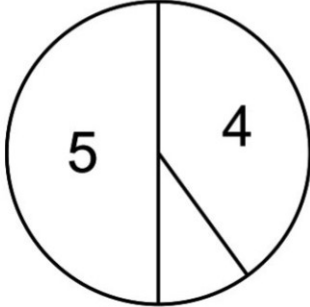
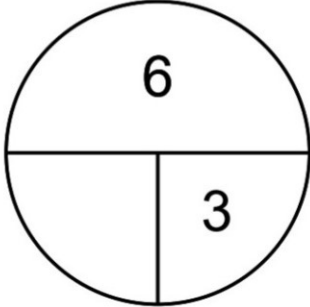
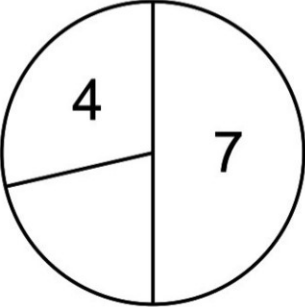
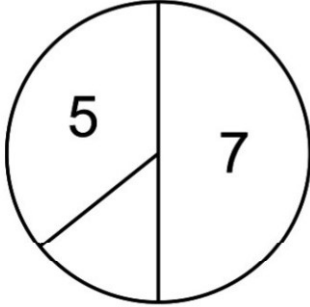
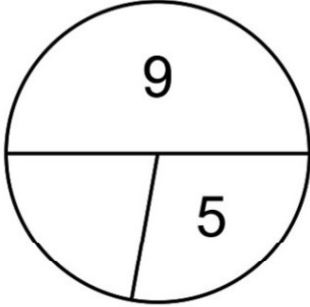
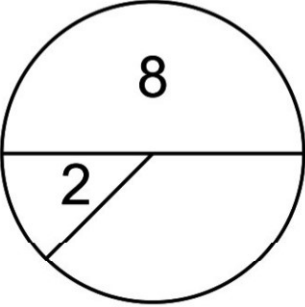
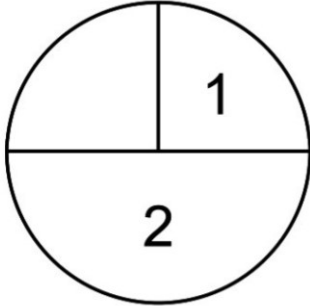
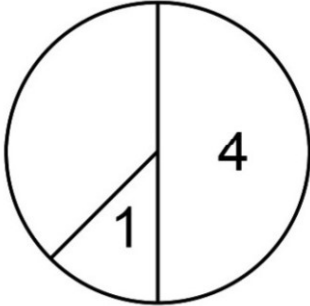
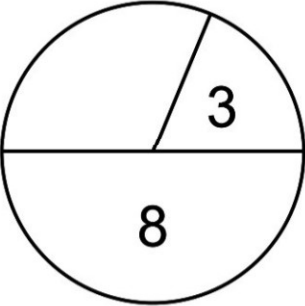
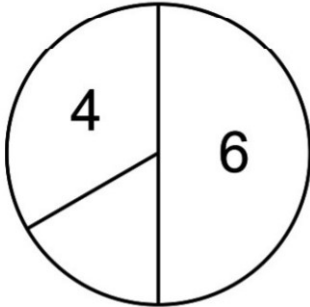
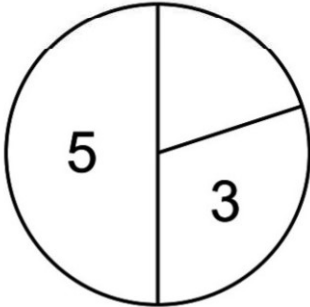
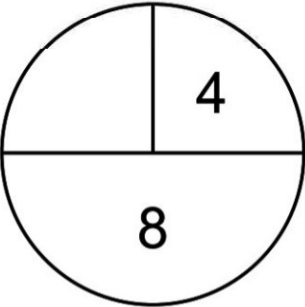
Part, Part, Whole. Fill in the missing numbers.



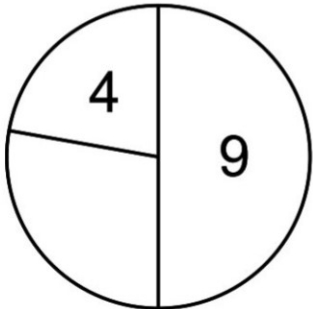
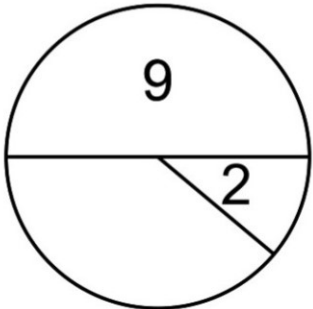
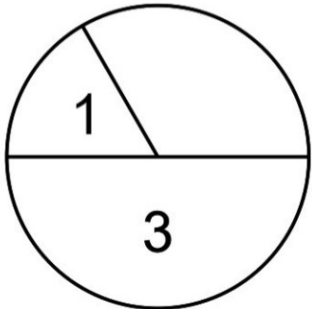
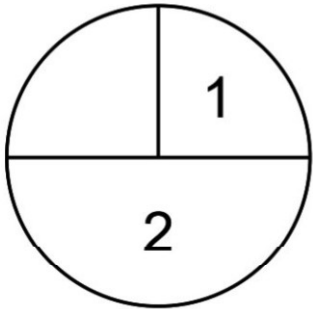
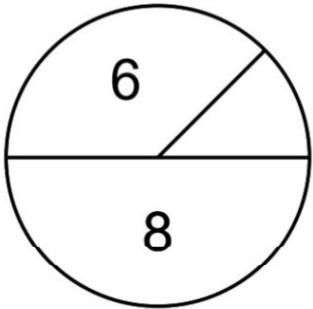
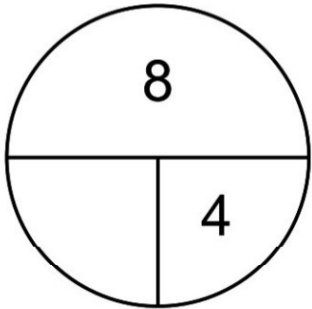
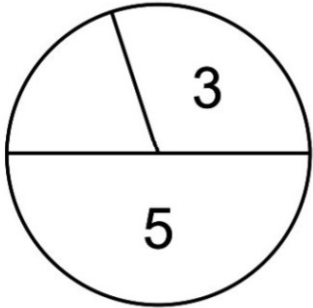
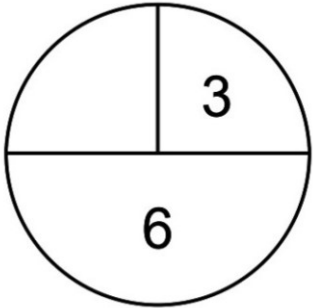
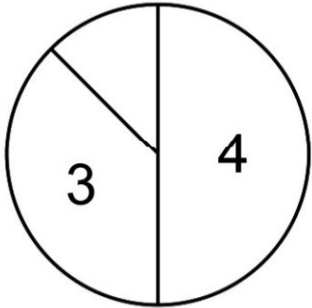
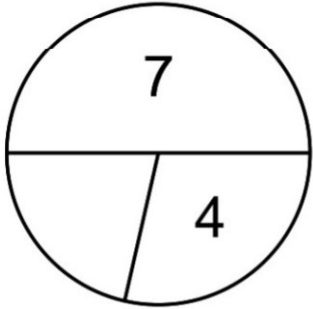
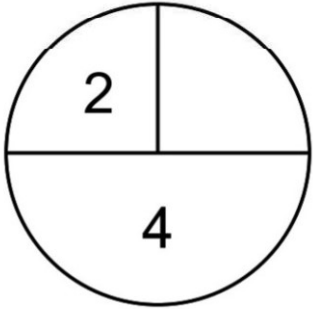
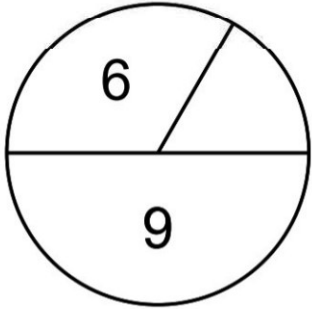
Part, Part, Whole. Fill in the missing numbers.

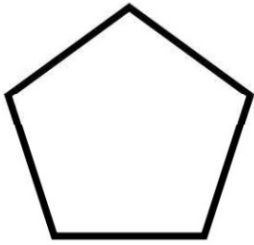


Part, Part, Whole. Fill in the missing numbers.



Part, Part, Whole. Fill in the missing numbers.



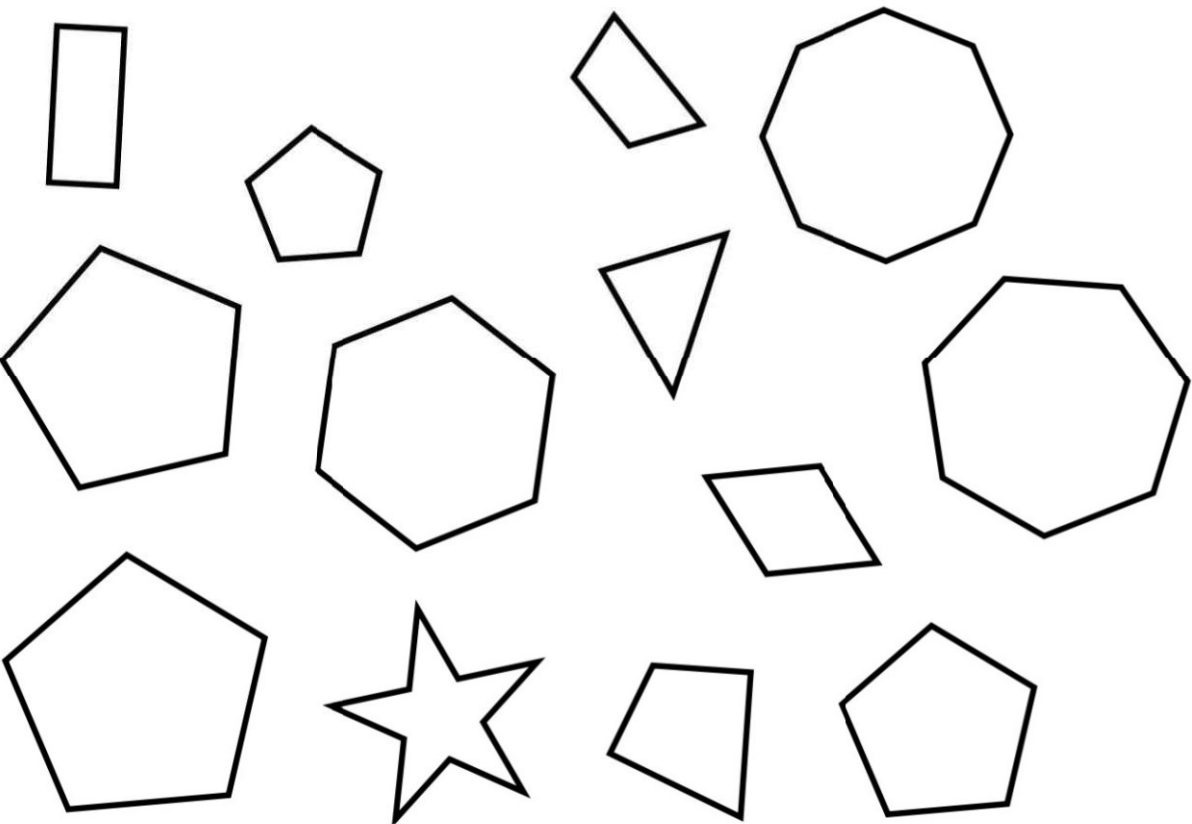


pentagon

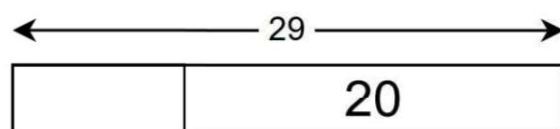
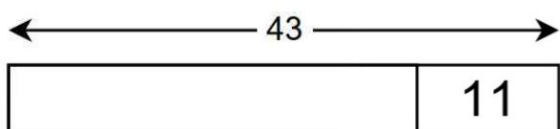
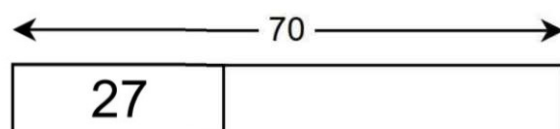
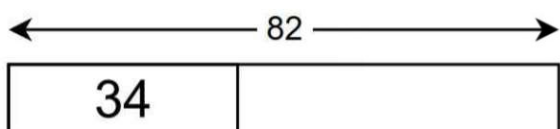
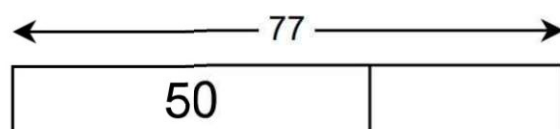
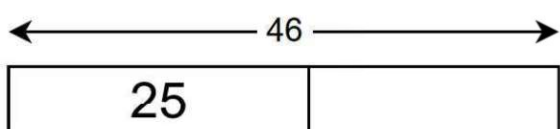
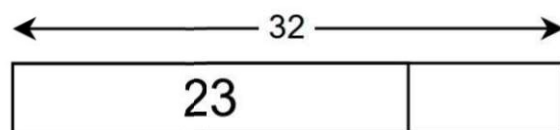
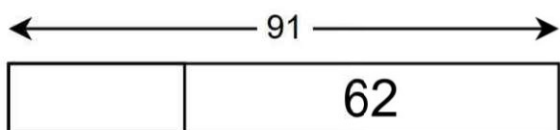
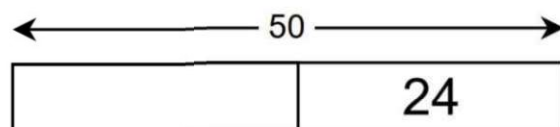
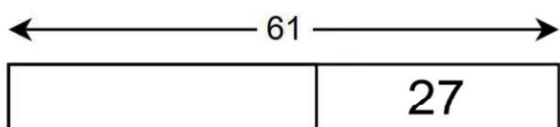
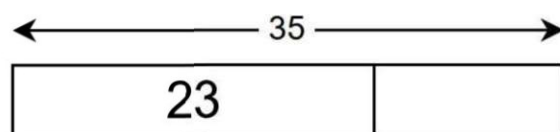
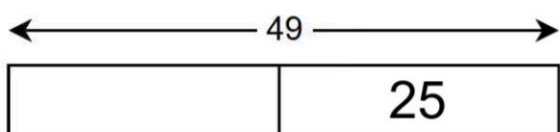
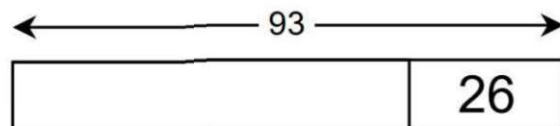
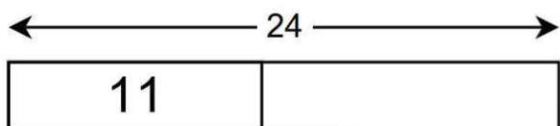
pentagon

A pentagon has ___ sides.

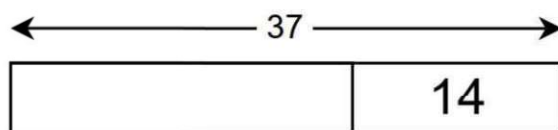
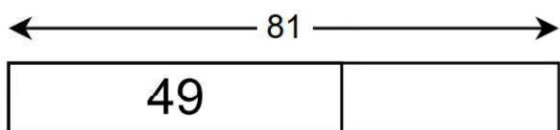
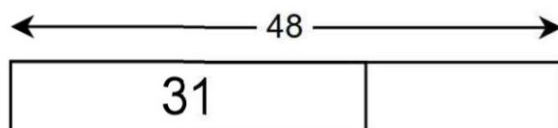
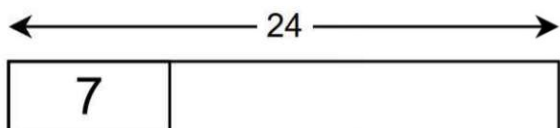
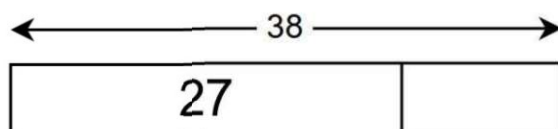
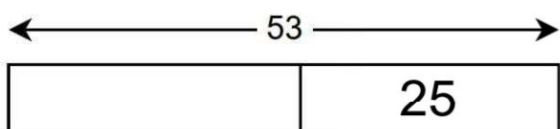
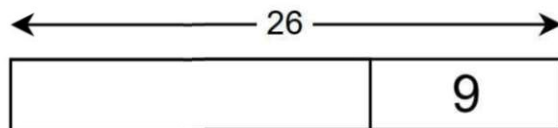
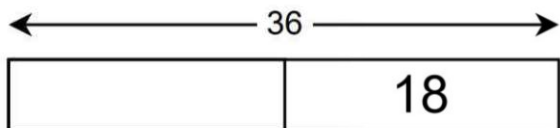
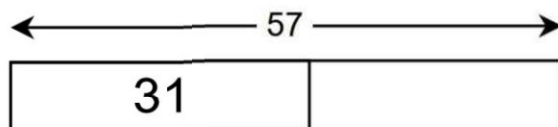
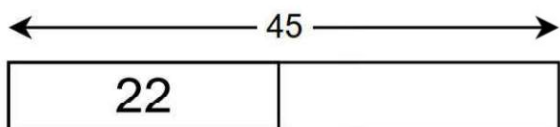
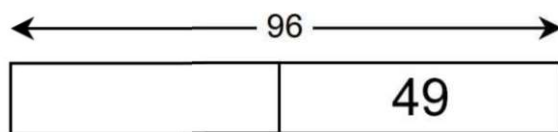
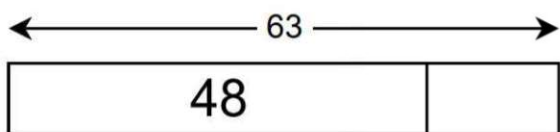
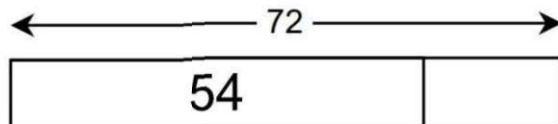
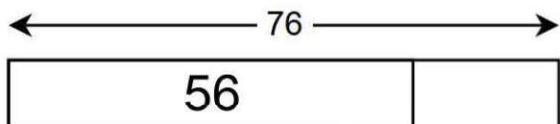
Color in each pentagon.



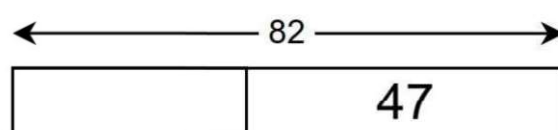
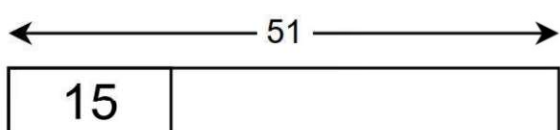
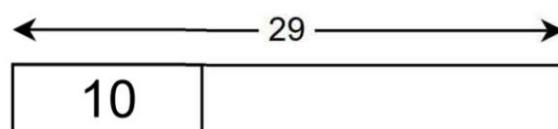
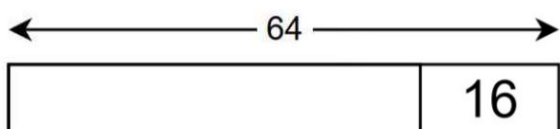
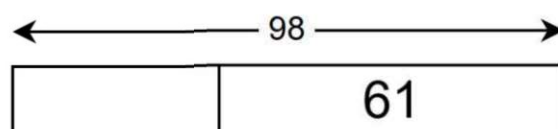
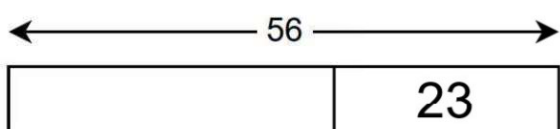
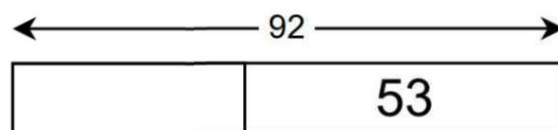
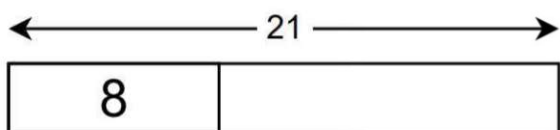
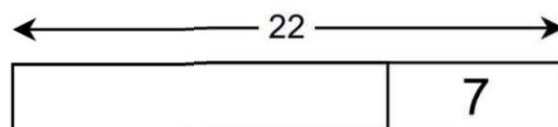
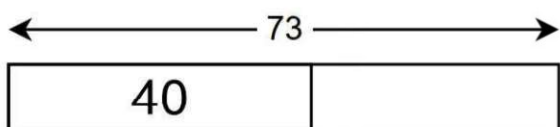
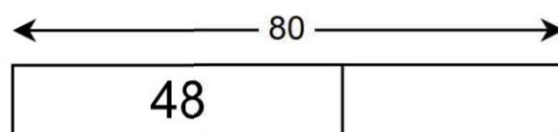
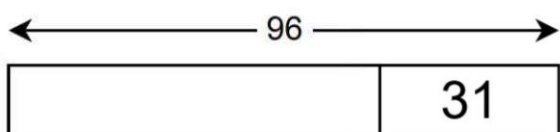
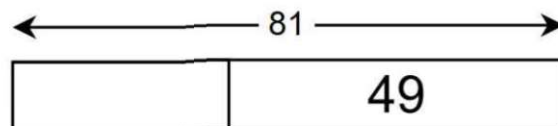
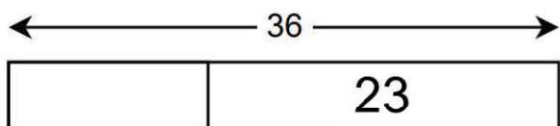
Part, Part, Whole. Fill in the missing numbers.



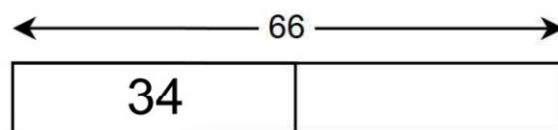
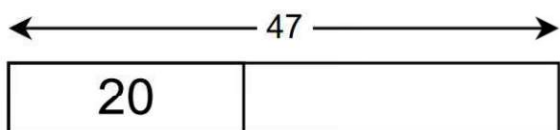
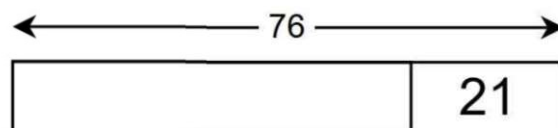
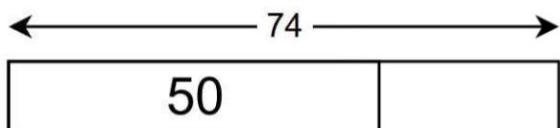
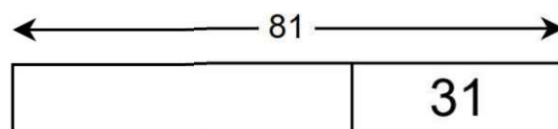
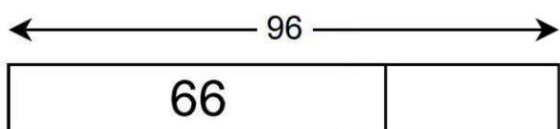
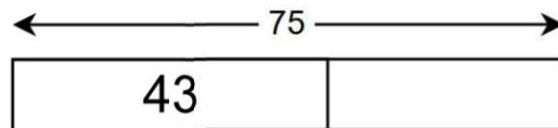
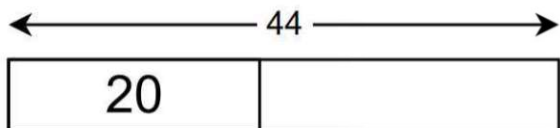
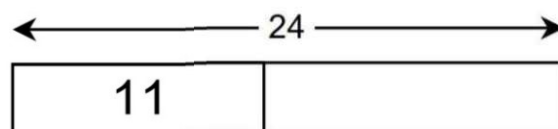
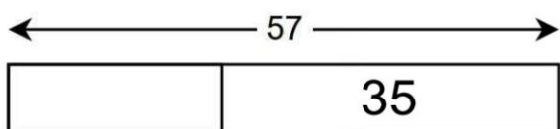
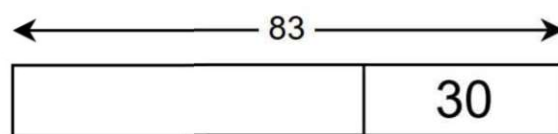
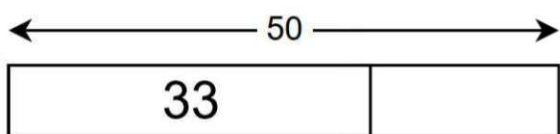
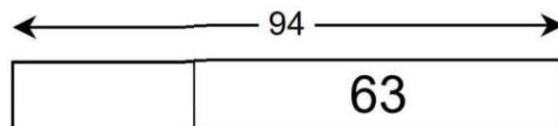
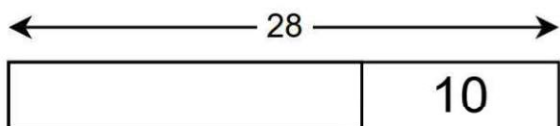
Part, Part, Whole. Fill in the missing numbers.



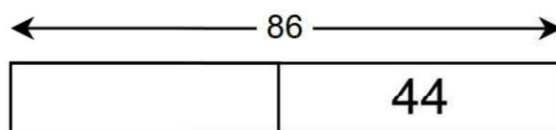
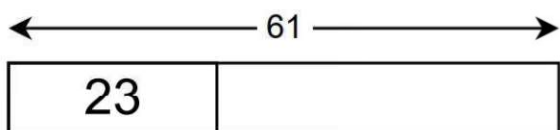
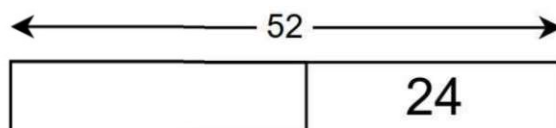
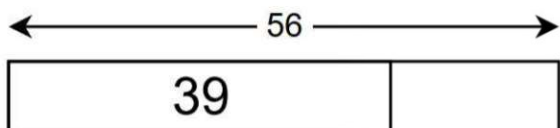
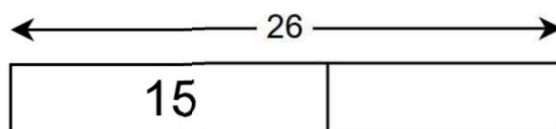
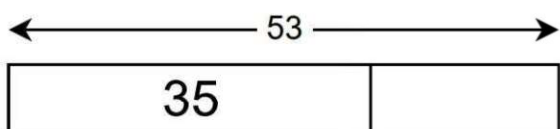
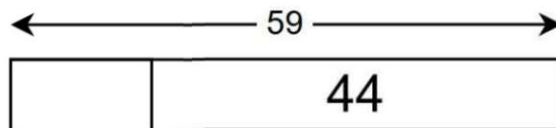
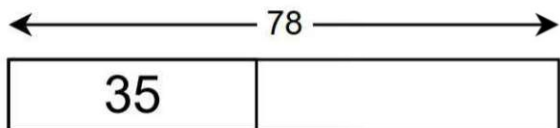
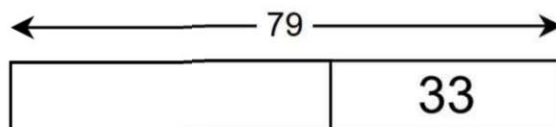
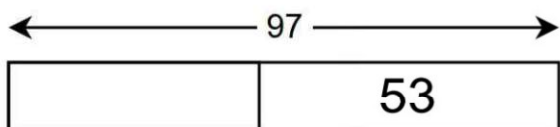
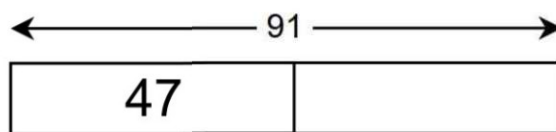
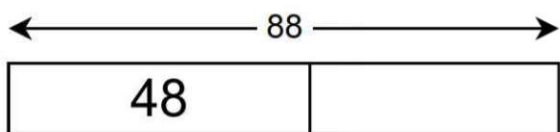
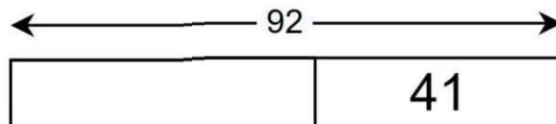
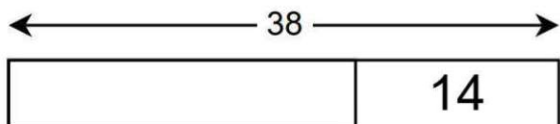
Part, Part, Whole. Fill in the missing numbers.

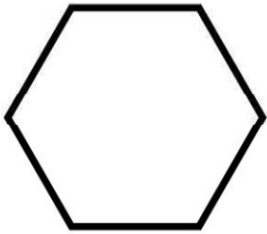


Part, Part, Whole. Fill in the missing numbers.

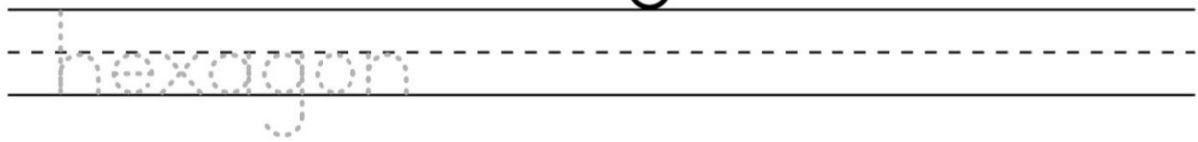


Part, Part, Whole. Fill in the missing numbers.



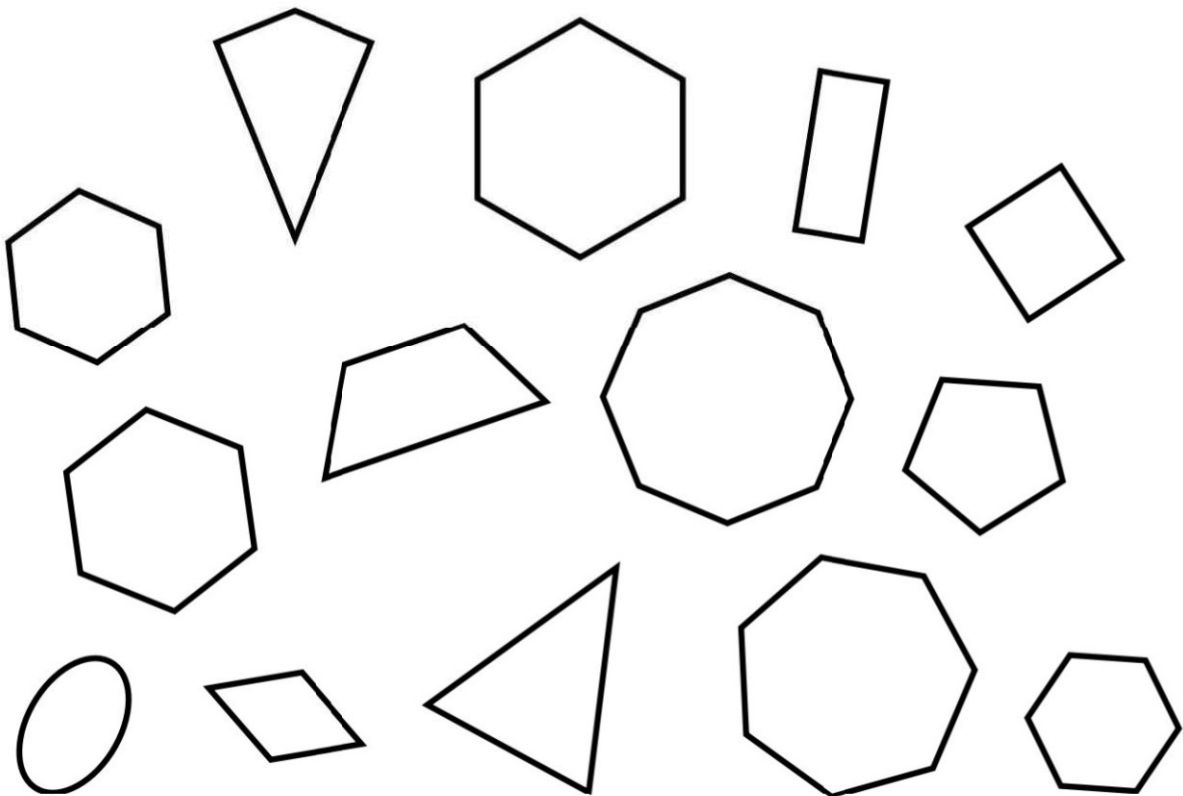


hexagon



A hexagon has ___ sides.

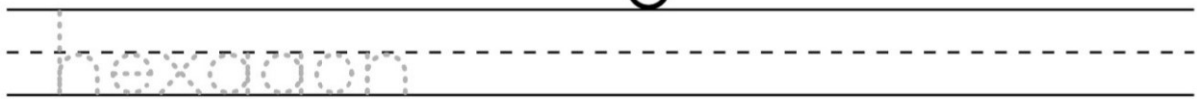
Color in each hexagon.



Answer Key

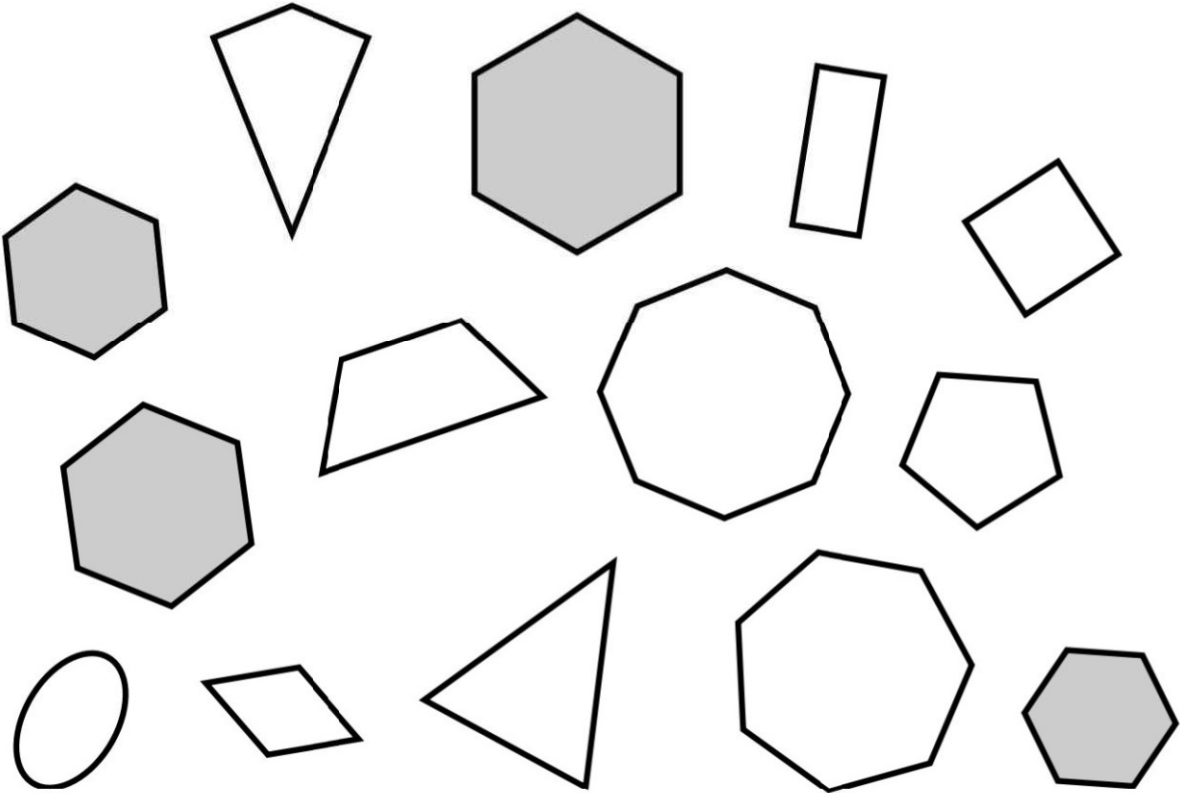


hexagon

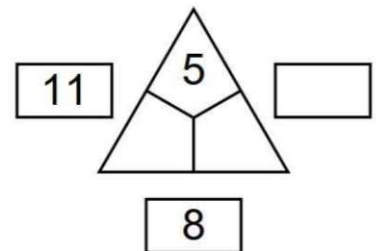
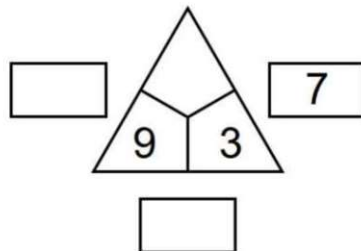
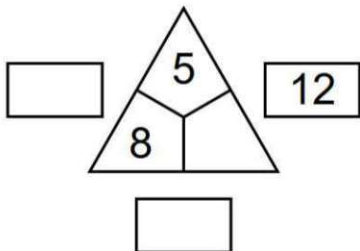
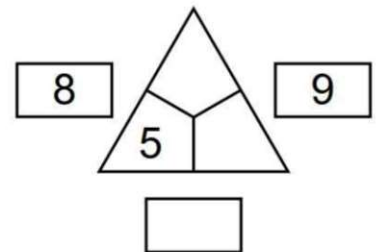
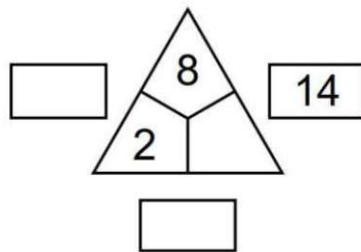
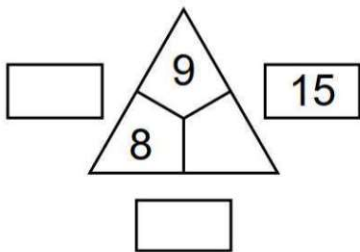
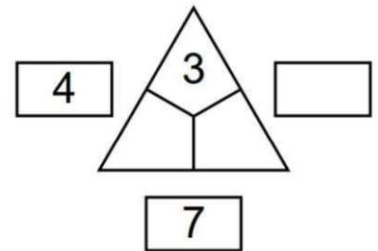
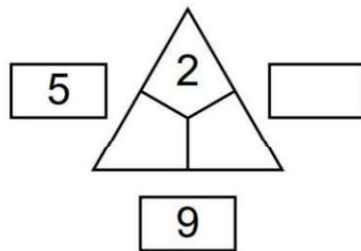
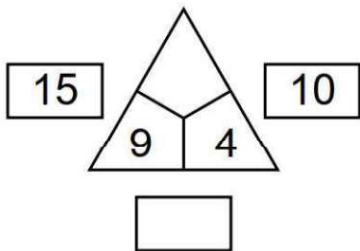
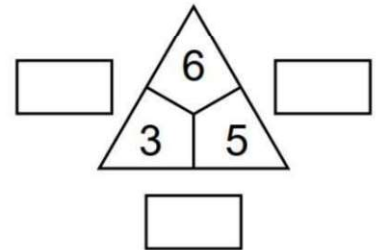
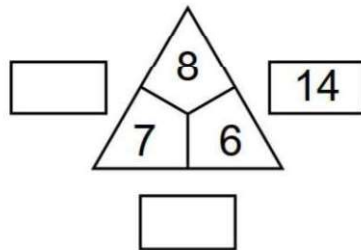
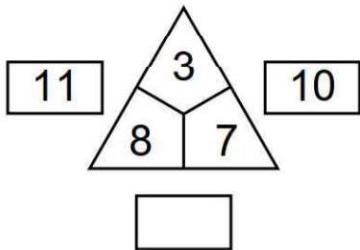


A hexagon has 6 sides.

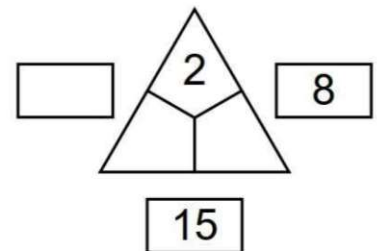
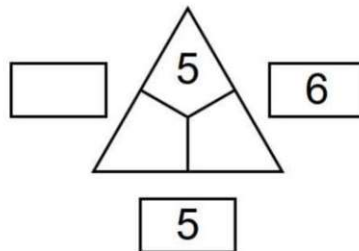
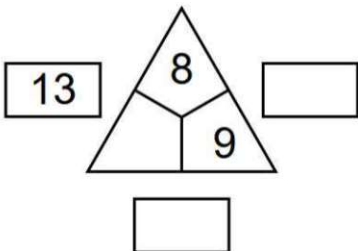
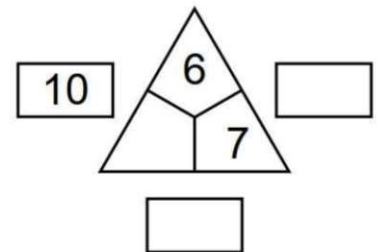
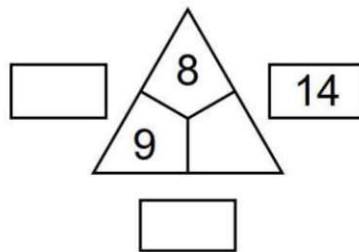
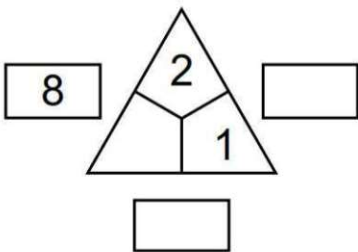
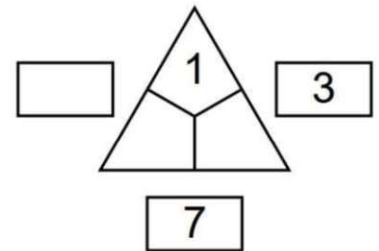
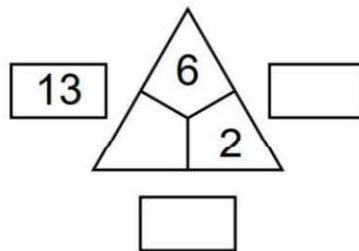
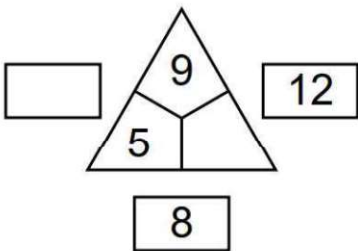
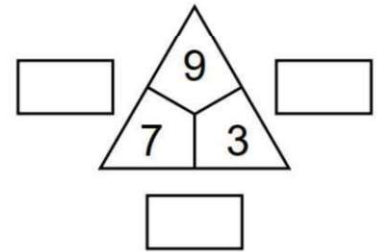
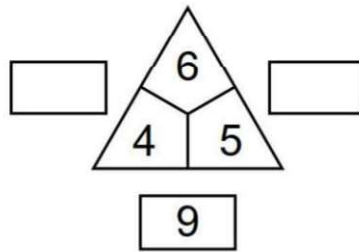
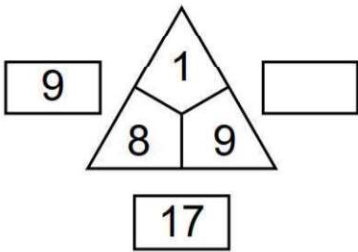
Color in each hexagon.



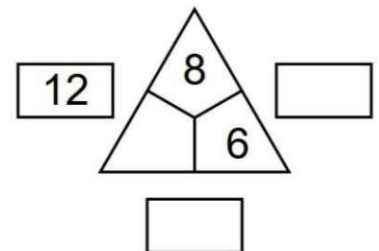
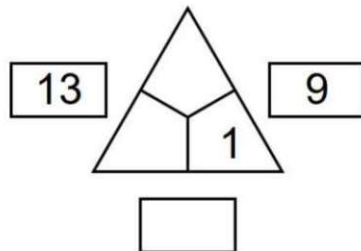
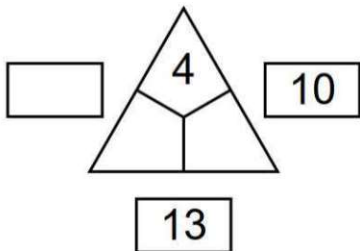
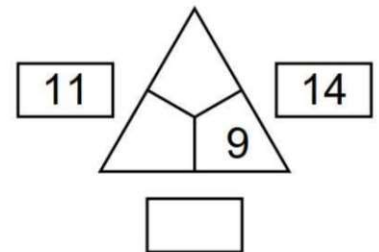
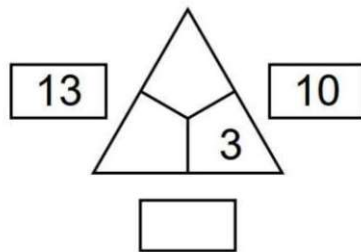
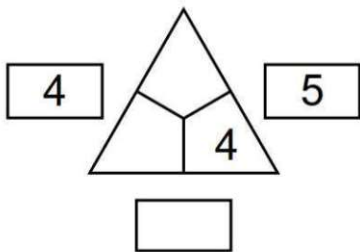
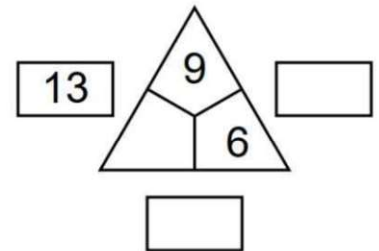
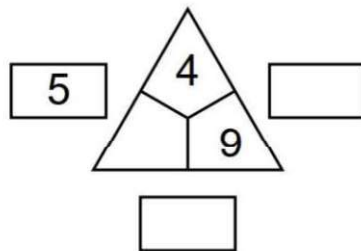
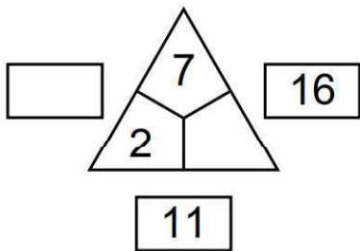
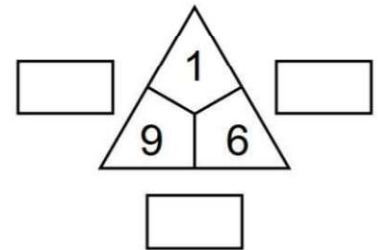
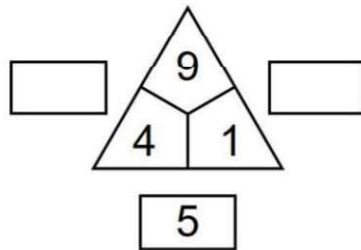
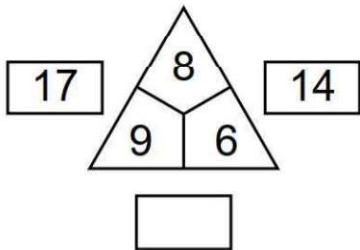
Addition Triads



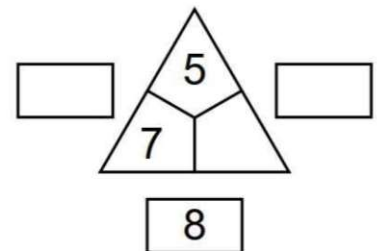
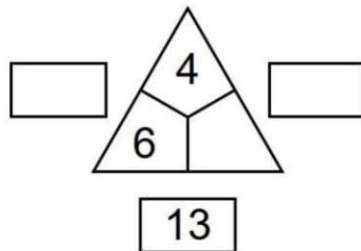
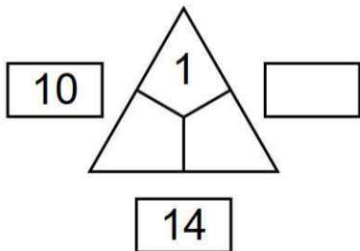
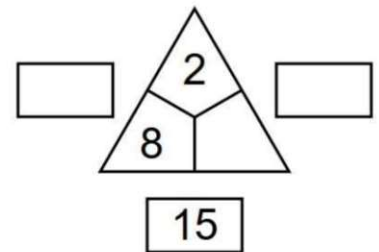
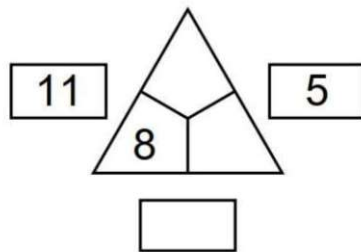
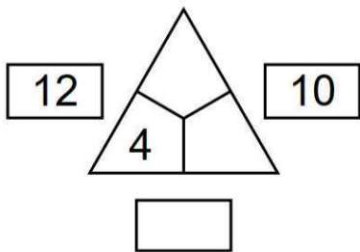
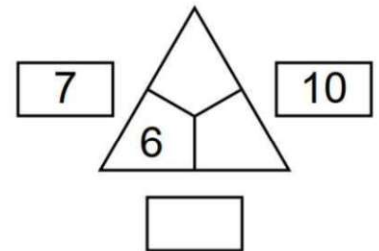
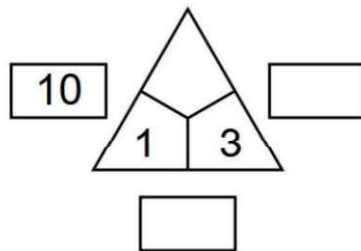
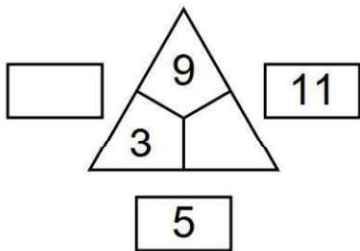
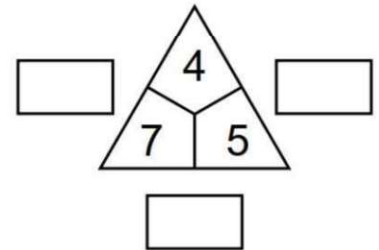
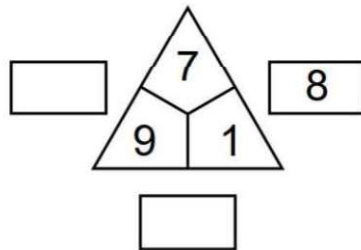
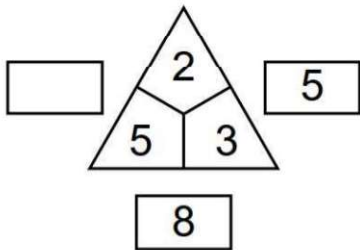
Addition Triads



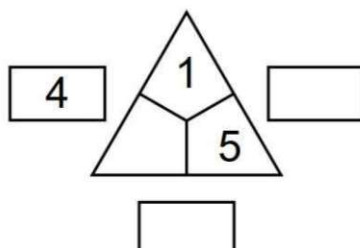
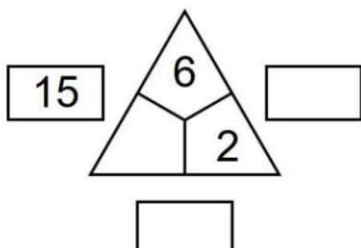
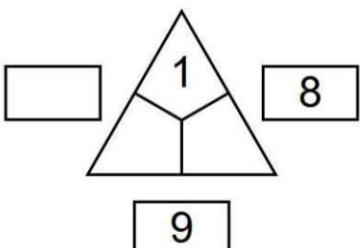
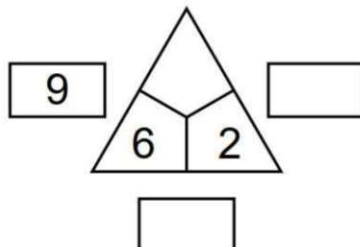
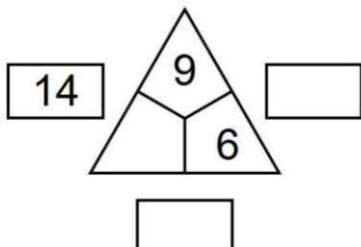
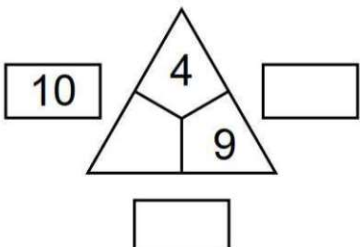
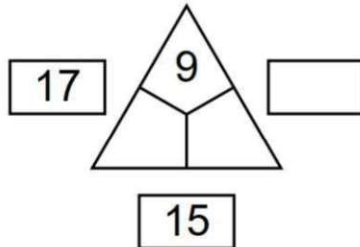
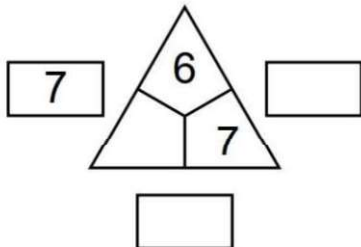
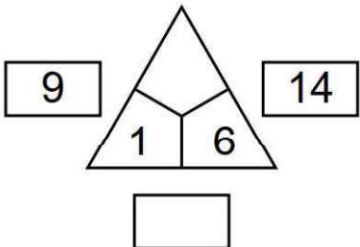
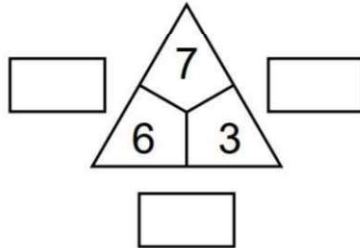
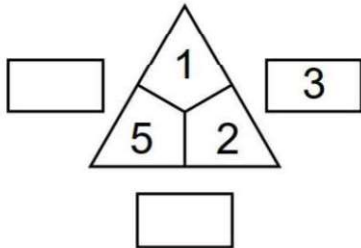
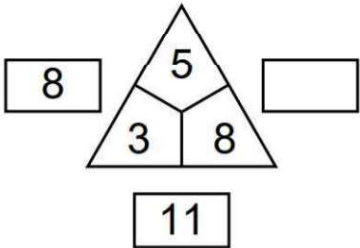
Addition Triads



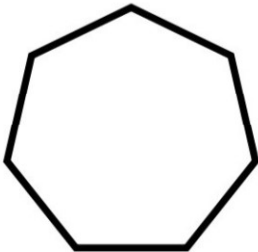
Addition Triads



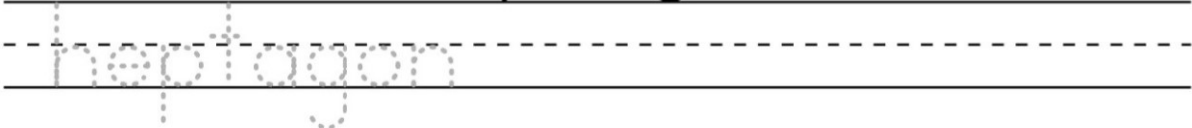
Addition Triads



Answer Key

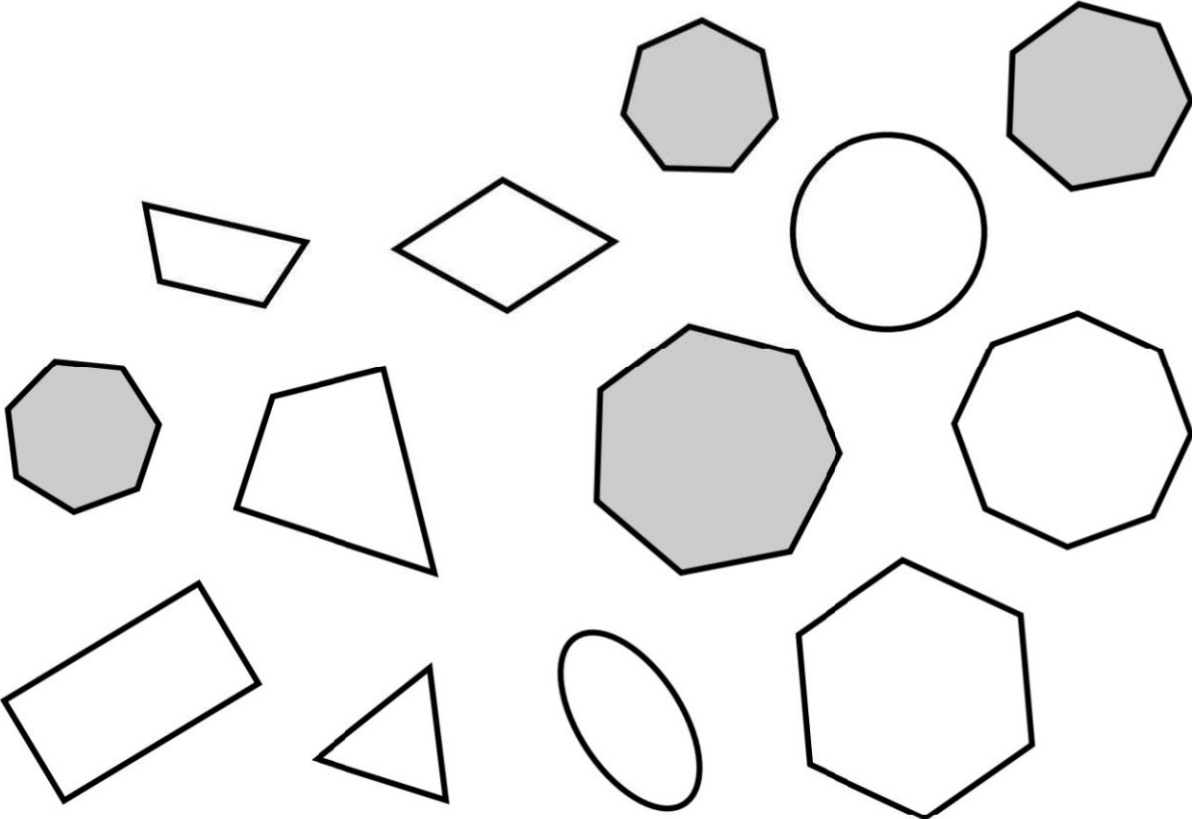


heptagon



A heptagon has 7 sides.

Color in each heptagon.



2	7	4	4	3	1	8	4
5	3	2	4	1	3	3	4
8	2	4	4	4	4	6	6
6	9	6	6	8	7	2	3
7	1	1	6	2	4	7	8
<u>+5</u>	<u>+4</u>	<u>+8</u>	<u>+2</u>	<u>+9</u>	<u>+6</u>	<u>+7</u>	<u>+7</u>

6	5	1	8	2	6	1	4
1	1	6	8	7	4	3	4
9	9	9	7	9	2	7	3
4	8	5	2	3	1	7	6
3	2	7	8	4	9	3	7
<u>+9</u>	<u>+9</u>	<u>+5</u>	<u>+2</u>	<u>+8</u>	<u>+4</u>	<u>+8</u>	<u>+3</u>

1	2	1	6	1	5	4	1
5	4	4	9	1	9	1	8
3	7	1	4	6	5	8	9
9	1	5	6	4	1	5	1
1	6	5	7	2	6	9	7
<u>+5</u>	<u>+8</u>	<u>+9</u>	<u>+3</u>	<u>+9</u>	<u>+2</u>	<u>+6</u>	<u>+2</u>

Answer Key

2	7	4	4	3	1	8	4
5	3	2	4	1	3	3	4
8	2	4	4	4	4	6	6
6	9	6	6	8	7	2	3
7	1	1	6	2	4	7	8
<u>+5</u>	<u>+4</u>	<u>+8</u>	<u>+2</u>	<u>+9</u>	<u>+6</u>	<u>+7</u>	<u>+7</u>
33	26	25	26	27	25	33	32

6	5	1	8	2	6	1	4
1	1	6	8	7	4	3	4
9	9	9	7	9	2	7	3
4	8	5	2	3	1	7	6
3	2	7	8	4	9	3	7
<u>+9</u>	<u>+9</u>	<u>+5</u>	<u>+2</u>	<u>+8</u>	<u>+4</u>	<u>+8</u>	<u>+3</u>
32	34	33	35	33	26	29	27

1	2	1	6	1	5	4	1
5	4	4	9	1	9	1	8
3	7	1	4	6	5	8	9
9	1	5	6	4	1	5	1
1	6	5	7	2	6	9	7
<u>+5</u>	<u>+8</u>	<u>+9</u>	<u>+3</u>	<u>+9</u>	<u>+2</u>	<u>+6</u>	<u>+2</u>
24	28	25	35	23	28	33	28

7	8	2	7	3	4	2	6
3	5	6	4	4	5	8	2
6	1	3	8	6	2	3	8
4	3	4	3	7	5	7	4
6	7	9	6	6	6	2	8
<u>+1</u>	<u>+9</u>	<u>+1</u>	<u>+5</u>	<u>+3</u>	<u>+4</u>	<u>+6</u>	<u>+2</u>

6	8	7	1	7	8	2	8
9	9	3	6	3	3	1	5
4	7	1	7	8	1	9	3
7	1	9	3	7	3	5	2
9	1	7	3	9	7	6	5
<u>+1</u>	<u>+2</u>	<u>+9</u>	<u>+4</u>	<u>+1</u>	<u>+9</u>	<u>+8</u>	<u>+5</u>

2	7	8	6	1	1	2	1
6	8	5	4	3	4	8	8
8	6	8	3	5	6	6	2
5	4	2	1	8	5	9	1
7	3	6	7	2	6	2	9
<u>+5</u>	<u>+2</u>	<u>+4</u>	<u>+7</u>	<u>+9</u>	<u>+5</u>	<u>+1</u>	<u>+2</u>

4	9	2	2	9	5	5	4
3	4	5	8	4	5	5	5
7	8	5	2	6	3	1	3
8	4	9	8	5	7	3	7
6	6	5	1	3	3	5	9
<u>+4</u>	<u>+1</u>	<u>+8</u>	<u>+8</u>	<u>+7</u>	<u>+8</u>	<u>+7</u>	<u>+1</u>

1	2	5	2	2	7	9	5
8	7	8	7	1	6	2	5
2	8	9	9	9	3	2	3
2	3	1	3	7	9	1	6
9	2	5	8	6	7	8	4
<u>+9</u>	<u>+4</u>	<u>+9</u>	<u>+3</u>	<u>+3</u>	<u>+1</u>	<u>+3</u>	<u>+2</u>

5	6	4	4	8	5	7	7
2	8	2	6	5	1	4	3
2	6	6	7	4	5	3	9
8	4	3	6	8	5	8	1
7	2	7	5	6	7	7	2
<u>+5</u>	<u>+2</u>	<u>+6</u>	<u>+3</u>	<u>+2</u>	<u>+9</u>	<u>+6</u>	<u>+3</u>

1	9	2	6	4	7	3	7
8	7	8	3	9	3	6	6
2	3	1	7	1	4	5	3
1	9	3	3	1	2	3	3
6	7	3	4	4	6	7	1
<u>+9</u>	<u>+1</u>	<u>+7</u>	<u>+8</u>	<u>+6</u>	<u>+5</u>	<u>+7</u>	<u>+4</u>

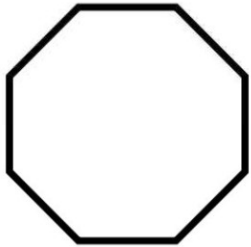
6	1	1	2	6	1	6	4
7	9	5	4	8	2	4	2
1	2	7	3	1	9	7	8
4	6	7	3	2	3	5	8
9	7	3	8	9	8	5	6
<u>+3</u>	<u>+4</u>	<u>+5</u>	<u>+7</u>	<u>+9</u>	<u>+2</u>	<u>+3</u>	<u>+4</u>

1	6	5	6	4	1	4	5
9	1	7	1	6	5	6	6
2	4	3	5	7	4	4	5
9	5	5	9	6	6	3	4
1	5	9	3	7	4	7	3
<u>+6</u>	<u>+5</u>	<u>+3</u>	<u>+5</u>	<u>+3</u>	<u>+5</u>	<u>+2</u>	<u>+5</u>

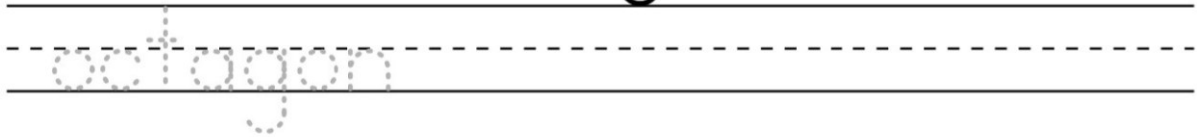
9	5	6	8	6	9	5	3
4	9	7	1	9	7	7	4
2	2	4	9	6	9	8	3
1	2	6	4	1	1	9	4
5	8	3	9	1	6	5	7
<u>+8</u>	<u>+8</u>	<u>+3</u>	<u>+2</u>	<u>+4</u>	<u>+1</u>	<u>+1</u>	<u>+6</u>

6	2	4	1	2	9	2	3
5	6	4	2	8	1	7	3
5	8	6	9	2	1	5	8
2	9	8	8	1	4	5	7
6	2	2	9	3	6	3	2
<u>+4</u>	<u>+4</u>	<u>+6</u>	<u>+7</u>	<u>+7</u>	<u>+4</u>	<u>+8</u>	<u>+8</u>

7	9	5	5	1	9	2	6
9	5	4	7	4	2	6	7
5	4	1	3	4	4	9	9
1	5	6	3	6	8	1	1
4	6	9	5	7	6	4	2
<u>+3</u>	<u>+3</u>	<u>+1</u>	<u>+5</u>	<u>+3</u>	<u>+6</u>	<u>+8</u>	<u>+3</u>

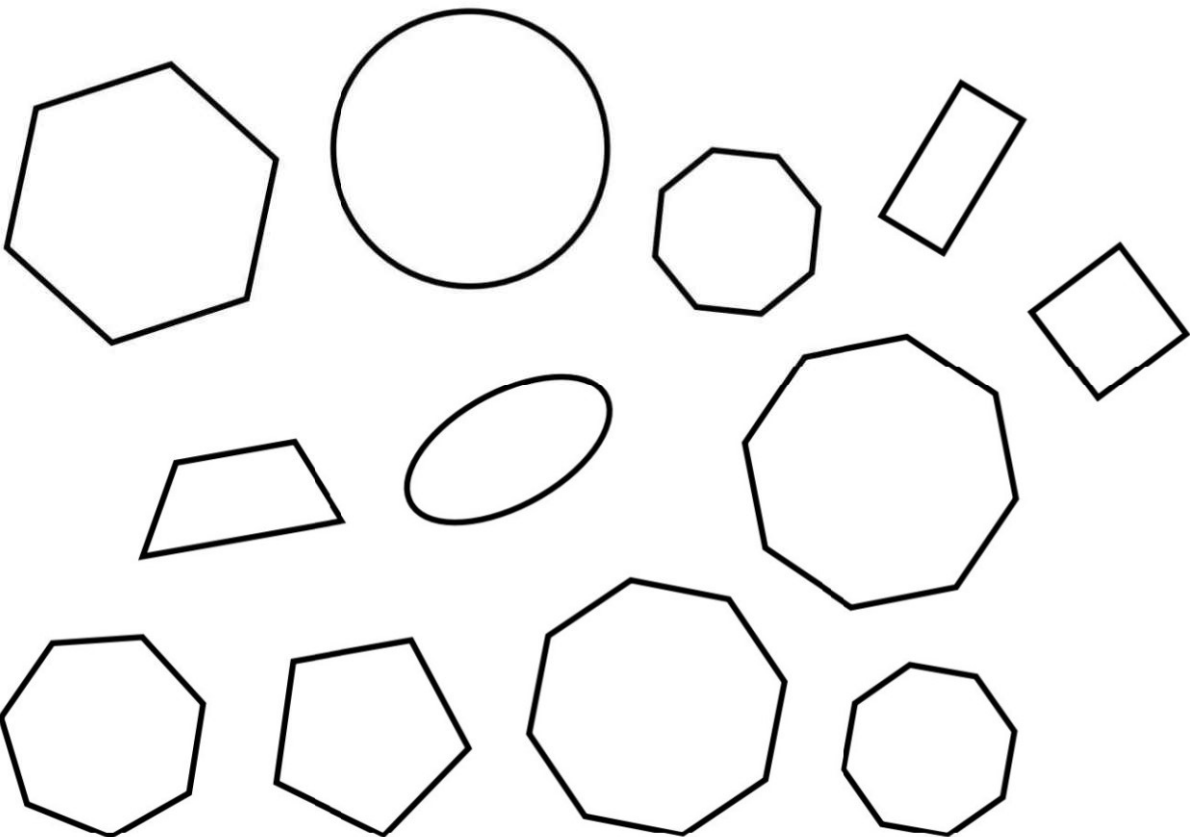


octagon

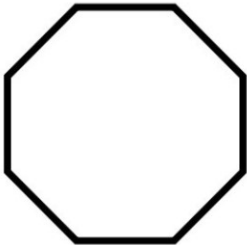


An octagon has ___ sides.

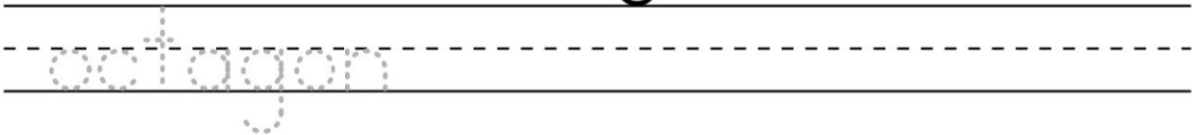
Color in each octagon.



Answer Key

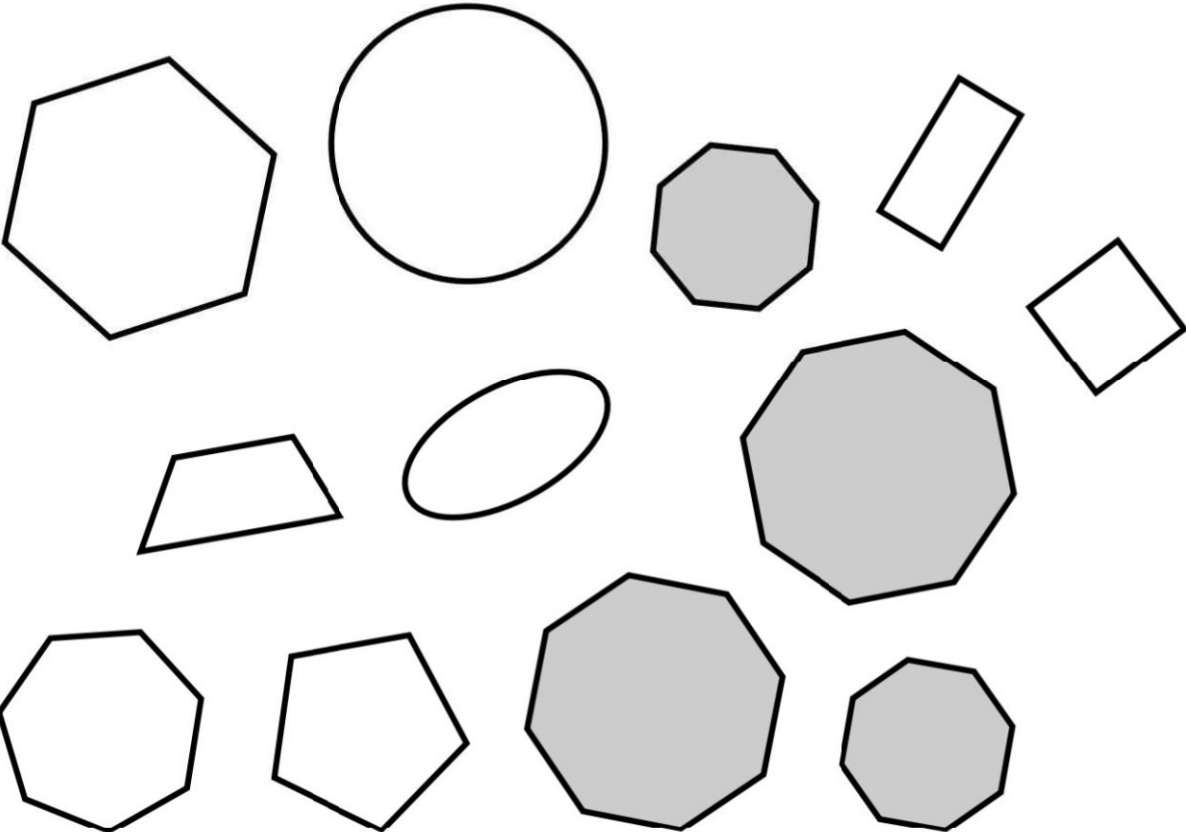


octagon



An octagon has 8 sides.

Color in each octagon.



6 more than ____ is 7.

____ is 7 less than 12.

4 less than 9 is ____.

3 is ____ less than 9.

____ less than 10 is 2.

9 less than ____ is 4.

6 is 2 more than ____.

1 is 2 less than ____.

8 more than 3 is ____.

16 is ____ more than 7.

7 more than _____ is 13.

1 is _____ less than 9.

9 is 2 less than _____.

5 is 2 more than _____.

_____ is 6 more than 3.

7 less than _____ is 4.

8 less than 10 is _____.

_____ is 7 less than 11.

_____ more than 2 is 8.

9 is _____ more than 5.

3 more than 5 is _____.

6 is 8 less than _____.

6 is 2 more than _____.

5 less than _____ is 3.

3 more than _____ is 9.

7 is _____ less than 16.

10 is _____ more than 2.

1 less than 8 is _____.

_____ more than 7 is 11.

_____ is 3 more than 1.

_____ is 9 more than 3.

13 is _____ more than 7.

5 is 2 more than _____.

7 less than 16 is _____.

_____ less than 12 is 4.

8 more than _____ is 11.

_____ more than 5 is 11.

9 is 5 less than _____.

4 less than _____ is 1.

4 more than 8 is _____.

_____ more than 3 is 10.

8 less than _____ is 3.

1 is 3 less than _____.

_____ is 6 more than 2.

12 is 5 more than _____.

9 is _____ less than 12.

_____ is 6 less than 9.

5 more than 4 is _____.

11 is _____ more than 9.

4 less than 13 is _____.

Convert each decimal number to a Roman numeral.

35 _____

4 _____

6 _____

10 _____

21 _____

17 _____

19 _____

3 _____

25 _____

8 _____

Convert each Roman numeral to a decimal number.

XIV _____

XI _____

XXXVI _____

XXXVII _____

XXX _____

XXVIII _____

XXII _____

XXIV _____

VII _____

II _____

Answer Key

Convert each decimal number to a Roman numeral.

35 XXXV

4 IV

6 VI

10 X

21 XXI

17 XVII

19 XIX

3 III

25 XXV

8 VIII

Convert each Roman numeral to a decimal number.

XIV 14

XI 11

XXXVI 36

XXXVII 37

XXX 30

XXVIII 28

XXII 22

XXIV 24

VII 7

II 2

Convert each decimal number to a Roman numeral.

31 _____

27 _____

34 _____

22 _____

15 _____

14 _____

35 _____

13 _____

6 _____

30 _____

Convert each Roman numeral to a decimal number.

XXXVI _____

XVI _____

XXXVIII _____

XXVIII _____

XII _____

IX _____

II _____

XXV _____

XIX _____

XXXIII _____

Convert each decimal number to a Roman numeral.

25 _____

22 _____

19 _____

2 _____

14 _____

27 _____

15 _____

33 _____

38 _____

32 _____

Convert each Roman numeral to a decimal number.

IV _____

XVIII _____

XII _____

XXVI _____

III _____

XXXIV _____

XXXVI _____

XX _____

XXIX _____

V _____

Convert each decimal number to a Roman numeral.

3 _____	32 _____
14 _____	15 _____
24 _____	33 _____
10 _____	21 _____
28 _____	34 _____

Convert each Roman numeral to a decimal number.

XVII _____	XXXVIII _____
IV _____	XXX _____
V _____	XXXVII _____
VI _____	XXXVI _____
XXVII _____	XII _____

Convert each decimal number to a Roman numeral.

15 _____

3 _____

13 _____

4 _____

29 _____

30 _____

8 _____

17 _____

28 _____

14 _____

Convert each Roman numeral to a decimal number.

XXXV _____

XXV _____

XXXVIII _____

XXXVI _____

XXXIII _____

XXXIV _____

XXIII _____

XXXII _____

XXIV _____

XVIII _____

Put each word list in alphabetical order

fir, elm, birch, pine

gust, wind, rain, snow

clean, mop, sweep, broom

wall, roof, floor, stair

foot, knee, hand, leg

swim, pool, water, dive

Answer Key

Put each word list in alphabetical order

fir, elm, birch, pine

birch , elm , fir , pine

gust, wind, rain, snow

gust , rain , snow , wind

clean, mop, sweep, broom

broom , clean , mop , sweep

wall, roof, floor, stair

floor , roof , stair , wall

foot, knee, hand, leg

foot , hand , knee , leg

swim, pool, water, dive

dive , pool , swim , water

Put each word list in alphabetical order

taste, smell, feel, hear

_____> _____> _____> _____

river, brook, lake, creek

_____> _____> _____> _____

vest, coat, belt, hat

_____> _____> _____> _____

run, quick, dash, fast

_____> _____> _____> _____

plate, bowl, knife, cup

_____> _____> _____> _____

swim, water, pool, dive

_____> _____> _____> _____

Put each word list in alphabetical order

cut, tool, drill, saw

hat, vest, belt, coat

ear, nose, jaw, mouth

shade, birch, oak, maple

floor, wall, stair, roof

west, east, north, south

Put each word list in alphabetical order

farm, grow, crop, plow

shine, bright, glow, light

dive, water, pool, swim

moth, flea, bug, wasp

road, bridge, lane, street

eye, chin, jaw, face

Put each word list in alphabetical order

wind, dew, snow, gust

cut, tool, saw, drill


knife, glass, bowl, spoon

bridge, street, lane, road


pink, gray, yellow, blue

jay, lark, wren, robin


Can you find your way through the maze?




Can you find your way through the maze?




Can you find your way through the maze?



Can you find your way through the maze?



Can you find your way through the maze?



Write each number in expanded form and as words.

For example: 123
100 + 20 + 3
one hundred twenty-three

424

317

41

851

22

Write each number in expanded form and as words.

For example: 123
100 + 20 + 3
one hundred twenty-three

39

63

357

83

919

Write each number in expanded form and as words.

For example: 123
100 + 20 + 3
one hundred twenty-three


72

37

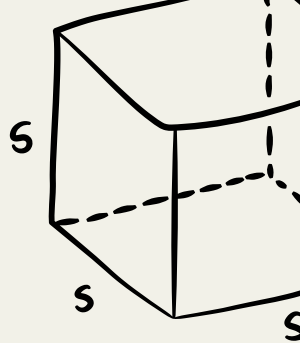
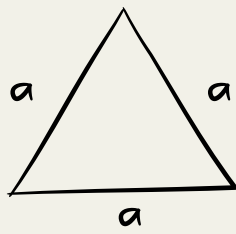
662

25

263



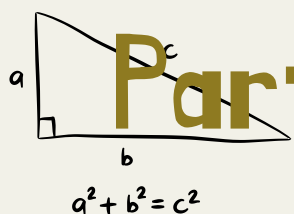
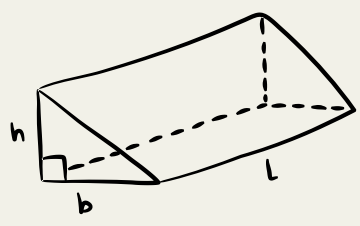
$$\frac{-b \pm \sqrt{b^2 - 4ac}}{2a}$$



BASIC MATHS

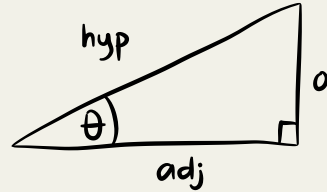
$$\frac{x}{a} + \frac{y}{b} = 1$$

$$V = s^3$$



Part 2 $S = \frac{d}{t}$

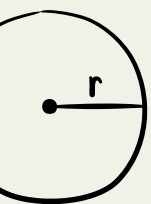

$$a^2 + b^2 = c^2$$




$$\sin(\theta) = \frac{\text{opp}}{\text{hyp}}$$

$$V = \frac{1}{2} bhl$$


$$y = mx + b$$



$$M = \left(\frac{x_1 + x_2}{2}, \frac{y_1 + y_2}{2} \right)$$




$$A = \pi r^2$$

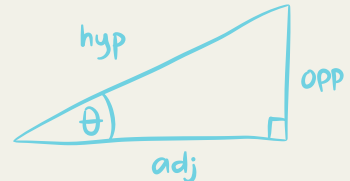
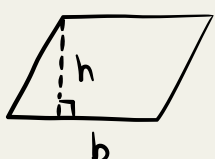


$$a = \frac{V_f - V_i}{t}$$

$$ax^2 + bx + c = 0$$



$$V = Lwh$$



$$\cos(\theta) = \frac{\text{adj}}{\text{hyp}}$$

$$S = \frac{d}{t}$$

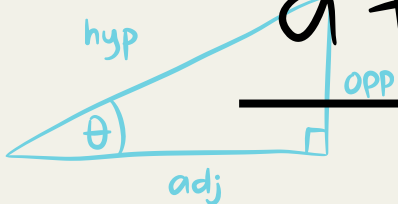
$$A = bh$$

$$y = mx + b$$

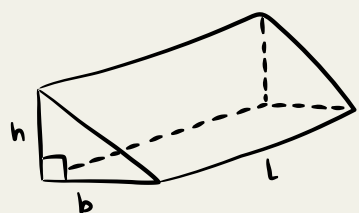
$$A = bh$$

$$a + (b + c) = (a + b) + c$$

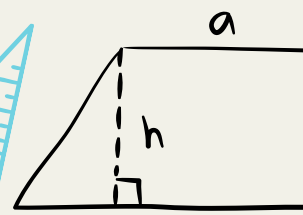
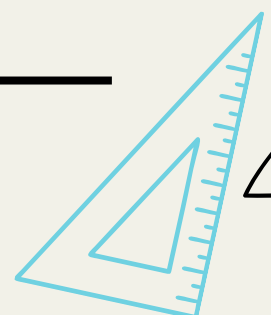
$$a + 0 = a$$



$$\tan(\theta) = \frac{\text{opp}}{\text{adj}}$$



$$V = \frac{1}{2} bhl$$



$$A = \frac{a+b}{2} h$$

